

Q1. Steel rods are cleaned before they are painted. The rods are cleaned by passing them through a bath of dilute sulfuric acid. This process produces large quantities of iron(II) sulfate.

- (a) Write an equation for the reaction between iron and dilute sulfuric acid.

.....

(1)

- (b) State **one** chemical hazard in this process and suggest an appropriate safety precaution for this hazard.

Hazard

Precaution

(2)

(Total 3 marks)

Q2. In this question give all your answers to three significant figures.

Magnesium nitrate decomposes on heating to form magnesium oxide, nitrogen dioxide and oxygen as shown in the following equation.



- (a) Thermal decomposition of a sample of magnesium nitrate produced 0.741 g of magnesium oxide.

- (i) Calculate the amount, in moles, of MgO in 0.741 g of magnesium oxide.

.....

.....

(2)

- (ii) Calculate the total amount, in moles, of gas produced from this sample of magnesium nitrate.

.....

.....

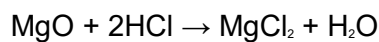
(1)

- (b) In another experiment, a different sample of magnesium nitrate decomposed to produce 0.402 mol of gas. Calculate the volume, in dm^3 , that this gas would occupy at 333 K and $1.00 \times 10^5 \text{ Pa}$.
(The gas constant $R = 8.31 \text{ J K}^{-1} \text{ mol}^{-1}$)

.....
.....
.....
.....

(3)

- (c) A 0.0152 mol sample of magnesium oxide, produced from the decomposition of magnesium nitrate, was reacted with hydrochloric acid.



- (i) Calculate the amount, in moles, of HCl needed to react completely with the 0.0152 mol sample of magnesium oxide.

.....

(1)

- (ii) This 0.0152 mol sample of magnesium oxide required 32.4 cm^3 of hydrochloric acid for complete reaction. Use this information and your answer to part (c) (i) to calculate the concentration, in mol dm^{-3} , of the hydrochloric acid.

.....
.....
.....

(1)

(Total 8 marks)

Q3. A student was given a task to determine the percentage purity of a sample of salicylic acid. The method used by the student to prepare a solution of salicylic acid is described below.

- 0.500 g of an impure sample of salicylic acid was placed in a weighing bottle.
- The contents were tipped into a beaker and 100 cm^3 of distilled water were added.

- Salicylic acid does not dissolve well in cold water so the beaker and its contents were heated gently until all the solid had dissolved.
- The solution was poured into a 250 cm³ graduated flask and made up to the mark with distilled water.

(a) Give **two** additional instructions that would improve this method for making up the salicylic acid solution.

.....

.....

.....

.....

.....

(2)

(b) The pH of this solution was measured and a value of 2.50 was obtained. Calculate the concentration of salicylic acid in this solution. Assume that salicylic acid is the only acid in this solution. The K_a for salicylic acid is $1.07 \times 10^{-3} \text{ mol dm}^{-3}$. You may represent salicylic acid as HA. Show your working.

.....

.....

.....

.....

.....

(3)

(c) Use your answer to part (b) to calculate the mass of salicylic acid ($M_r = 138.0$) present in the original sample. (If you were unable to complete the calculation in part (b), assume that the concentration of salicylic acid is $8.50 \times 10^{-3} \text{ mol dm}^{-3}$. This is **not** the correct answer.)

.....

.....

.....

(2)

- (d) Use your answer to part (c) to calculate the percentage purity of the salicylic acid used to make the solution.
(If you were unable to complete the calculation in part (c), assume that the mass of salicylic acid is 0.347 g. This is **not** the correct answer.)

.....
.....

(1)
(Total 8 marks)

- Q4.(a)** Some metal ions are toxic to humans. A substance that can be used to treat such poisoning contains the ion EDTA^{4-} .
 EDTA^{4-} forms very stable complexes with metal ions. These complexes are **not** toxic.

- (i) Write an equation for the reaction of EDTA^{4-} with aqueous copper(II) ions, $[\text{Cu}(\text{H}_2\text{O})_6]^{2+}$.

.....

(1)

- (ii) A solution containing EDTA^{4-} can also be used in a titration to determine the concentration of metal ions in solution.
A river was polluted with copper(II) ions. When a 25.0 cm^3 sample of the river water was titrated with a $0.0150 \text{ mol dm}^{-3}$ solution of EDTA^{4-} , 6.45 cm^3 were required for complete reaction.
Calculate the concentration, in mol dm^{-3} , of copper(II) ions in the river water.
Show your working.

.....
.....
.....
.....

(2)

- (b) The determination of the concentration of copper(II) ions in a single sample of river water gives an unreliable value for the copper(II) ion pollution in the river.
Give one reason why this value is unreliable.

.....
.....

(1)

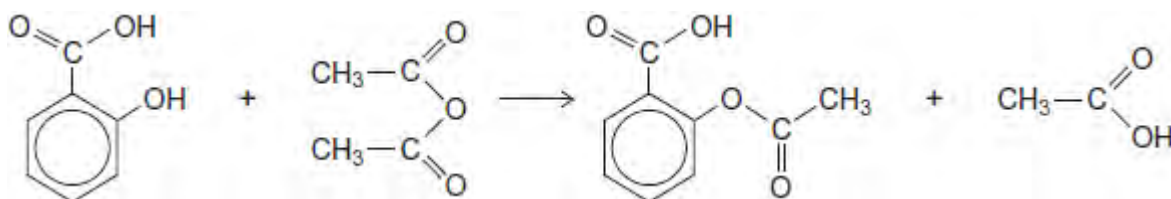
- (c) Silver complexes can be used to identify a particular organic functional group. Give **one** example of a silver complex that can be used in this way and state the organic functional group it identifies.

Silver complex

Organic functional group

(2)
(Total 6 marks)

Q5. Aspirin can be made by reacting salicylic acid with ethanoic anhydride as outlined below.



- (a) In an experiment, after purification by recrystallisation, 1.76 g of aspirin ($M_r = 180.0$) were produced from 2.00 g of salicylic acid. Calculate the percentage yield for this experiment.

.....

(2)

- (b) Suggest **one** practical reason why the yield of purified aspirin is less than 100%.

.....

(1)
(Total 3 marks)

Q6. Norgessalpeter was the first nitrogen fertiliser to be manufactured in Norway. It has

the formula $\text{Ca}(\text{NO}_3)_2$

- (a) Norgessalt peter can be made by the reaction of calcium carbonate with dilute nitric acid as shown by the following equation.



In an experiment, an excess of powdered calcium carbonate was added to 36.2 cm^3 of $0.586 \text{ mol dm}^{-3}$ nitric acid.

- (i) Calculate the amount, in moles, of HNO_3 in 36.2 cm^3 of $0.586 \text{ mol dm}^{-3}$ nitric acid. Give your answer to 3 significant figures.

.....
.....

(1)

- (ii) Calculate the amount, in moles, of CaCO_3 that reacted with the nitric acid. Give your answer to 3 significant figures.

.....
.....

(1)

- (iii) Calculate the minimum mass of powdered CaCO_3 that should be added to react with all of the nitric acid.

Give your answer to 3 significant figures.

.....
.....
.....

(2)

- (iv) State the type of reaction that occurs when calcium carbonate reacts with nitric acid.

.....

(1)

- (b) Norgessalt peter decomposes on heating as shown by the following equation.



A sample of Norgessalpeter was decomposed completely.

The gases produced occupied a volume of $3.50 \times 10^{-3} \text{ m}^3$ at a pressure of 100 kPa and a temperature of 31°C .

(The gas constant $R = 8.31 \text{ J K}^{-1} \text{ mol}^{-1}$)

- (i) Calculate the total amount, in moles, of gases produced.

.....
.....
.....
.....

(3)

- (ii) Hence calculate the amount, in moles, of oxygen produced.

.....
.....

(1)

- (c) Hydrated calcium nitrate can be represented by the formula $\text{Ca}(\text{NO}_3)_2 \cdot x\text{H}_2\text{O}$ where x is an integer.

A 6.04 g sample of $\text{Ca}(\text{NO}_3)_2 \cdot x\text{H}_2\text{O}$ contains 1.84 g of water of crystallisation.

Use this information to calculate a value for x .
Show your working.

.....
.....
.....
.....
.....
.....

(3)

(Total 12 marks)

Q7.The metal lead reacts with warm dilute nitric acid to produce lead(II) nitrate, nitrogen monoxide and water according to the following equation.



- (a) In an experiment, an 8.14 g sample of lead reacted completely with a 2.00 mol dm⁻³ solution of nitric acid.

Calculate the volume, in dm³, of nitric acid required for complete reaction.
Give your answer to 3 significant figures

.....
.....
.....
.....
.....
.....
.....
.....
.....

(Extra space)
.....
.....

(3)

- (b) In a second experiment, the nitrogen monoxide gas produced in the reaction occupied 638 cm³ at 101 kPa and 298 K.
Calculate the amount, in moles, of NO gas produced.
(The gas constant $R = 8.31 \text{ J K}^{-1} \text{ mol}^{-1}$)

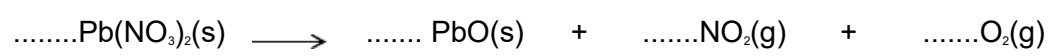
.....
.....
.....
.....

.....
(Extra space)
.....
.....

(3)

(c) When lead(II) nitrate is heated it decomposes to form lead(II) oxide, nitrogen dioxide and oxygen.

(i) Balance the following equation that shows this thermal decomposition.



(1)

(ii) Suggest **one** reason why the yield of nitrogen dioxide formed during this reaction is often less than expected.

.....
.....

(1)

(iii) Suggest **one** reason why it is difficult to obtain a pure sample of nitrogen dioxide from this reaction.

.....
.....

(1)

(Total 9 marks)