

Q1.The table contains some standard electrode potential data.

Electrode half-equation	E^\ominus / V
$F_2 + 2e^- \longrightarrow 2F^-$	+2.87
$Au^+ + e^- \longrightarrow Au$	+1.68
$2HOCl + 2H^+ + 2e^- \longrightarrow Cl_2 + 2H_2O$	+1.64
$Cl_2 + 2e^- \longrightarrow 2Cl^-$	+1.36
$O_2 + 4H^+ + 4e^- \longrightarrow 2H_2O$	+1.23
$Ag^+ + e^- \longrightarrow Ag$	+0.80
$Fe^{3+} + e^- \longrightarrow Fe^{2+}$	+0.77
$2H^+ + 2e^- \longrightarrow H_2$	0.00
$Fe^{2+} + 2e^- \longrightarrow Fe$	-0.44

(a) In terms of electrons, explain the meaning of the term **oxidising agent**.

.....

(1)

(b) Identify the weakest oxidising agent in the table.
 Explain your choice.

Weakest oxidising agent

Explanation

.....

(2)

(c) Write the conventional representation of the cell used to measure the standard electrode potential for the Ag^+ / Ag electrode.

State the conditions necessary when measuring this value.

Conventional representation

Conditions

(4)

- (d) Use data from the table to explain, in terms of redox, what happens when a soluble gold(I) compound containing Au^+ ions is added to water.

State what you would observe.

Write an equation for the reaction that occurs.

Explanation

Observation

Equation

(4)

The table is repeated below to help you answer these questions.

Electrode half-equation	E^\ominus / V
$\text{F}_2 + 2\text{e}^- \longrightarrow 2\text{F}^-$	+2.87
$\text{Au}^+ + \text{e}^- \longrightarrow \text{Au}$	+1.68
$2\text{HOCl} + 2\text{H}^+ + 2\text{e}^- \longrightarrow \text{Cl}_2 + 2\text{H}_2\text{O}$	+1.64
$\text{Cl}_2 + 2\text{e}^- \longrightarrow 2\text{Cl}^-$	+1.36
$\text{O}_2 + 4\text{H}^+ + 4\text{e}^- \longrightarrow 2\text{H}_2\text{O}$	+1.23
$\text{Ag}^+ + \text{e}^- \longrightarrow \text{Ag}$	+0.80

$\text{Fe}^{3+} + \text{e}^{-} \longrightarrow \text{Fe}^{2+}$	+0.77
$2\text{H}^{+} + 2\text{e}^{-} \longrightarrow \text{H}_2$	0.00
$\text{Fe}^{2+} + 2\text{e}^{-} \longrightarrow \text{Fe}$	-0.44

(e) A cell is made by connecting $\text{Fe}^{2+} / \text{Fe}$ and $\text{Ag}^{+} / \text{Ag}$ electrodes with a salt bridge.

(i) Calculate the e.m.f. of this cell.

.....

Answer

(1)

(ii) Suggest why potassium chloride would **not** be suitable for use in the salt bridge of this cell.

.....

(1)

(f) Use data from the table to explain what happens when a solution of iron(II) chloride is exposed to the air.

.....

(2)

(Total 15 marks)

Q2.In a test, aqueous iron(III) ions are reduced to aqueous iron(II) ions by iodide ions.

This reaction could be used to provide electrical energy in a cell.

- (a) The standard electrode potential for the reduction of iron(III) ions into iron(II) ions can be measured by connecting a suitable electrode to a standard hydrogen electrode.

Draw a clearly labelled diagram to show the components and reagents, including their concentrations, in this Fe(III)/Fe(II) electrode.

Do **not** draw the salt bridge or the standard hydrogen electrode.

(3)

- (b) A salt bridge is used to complete the cell. This could be prepared using potassium nitrate solution and filter paper.

State the purpose of the salt bridge. State **one** essential requirement of the soluble ionic compound used to make the salt bridge.

Purpose of salt bridge

.....

Requirement

.....

(2)

(Total 5 marks)

Q3.A biocide is a chemical that kills bacteria. A biocide is added to prevent the growth of bacteria in the water used in vases of flowers. Household bleach contains aqueous chlorine and can be used as the biocide. The concentration of chlorine in vase water decreases with time. It was decided to investigate the rate of this decrease.

The following experimental method was used to determine the concentration of chlorine in vase water at different times.

- A sample of vase water was taken.
- An excess of potassium iodide solution was added to the sample.
- The chlorine in the sample oxidised the I^- ions to I_2

- The iodine was titrated with sodium thiosulfate ($\text{Na}_2\text{S}_2\text{O}_3$) solution.
- These steps were repeated using further samples taken from the vase water at hourly intervals.

- (a) Suggest **two** reasons why the concentration of chlorine in the vase water decreases with time.

Reason 1

.....

Reason 2

.....

(2)

- (b) Suggest why this sampling technique has no effect on the rate at which the concentration of chlorine in the vase water decreases.

.....

.....

.....

(1)

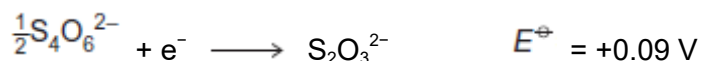
- (c) Why was it important to use an **excess** of potassium iodide solution?

.....

.....

(1)

- (d) Use the following standard electrode potential data to explain why I_2 oxidises $\text{S}_2\text{O}_3^{2-}$ under standard conditions.



.....

.....

.....

(1)

(e) Deduce an ionic equation for the reaction between I_2 and $S_2O_3^{2-}$

.....

(1)
 (Total 6 marks)

Q4. The table below shows some standard electrode potential data.

	E^\ominus / V
$ZnO(s) + H_2O(l) + 2e^- \longrightarrow Zn(s) + 2OH^-(aq)$	-1.25
$Fe^{2+}(aq) + 2e^- \longrightarrow Fe(s)$	-0.44
$O_2(g) + 2H_2O(l) + 4e^- \longrightarrow 4OH^-(aq)$	+0.40
$2HOCl(aq) + 2H^+(aq) + 2e^- \longrightarrow Cl_2(g) + 2H_2O(l)$	+1.64

(a) Give the conventional representation of the cell that is used to measure the standard electrode potential of iron as shown in the table.

.....

(2)

(b) With reference to electrons, give the meaning of the term **reducing agent**.

.....

(1)

(c) Identify the weakest reducing agent from the species in the table.

Explain how you deduced your answer.

Species.....

Explanation.....

.....

(2)

(d) When HOCl acts as an oxidising agent, one of the atoms in the molecule is reduced.

(i) Place a tick (✓) next to the atom that is reduced.

Atom that is reduced	Tick (✓)
H	
O	
Cl	

(1)

(ii) Explain your answer to part (i) in terms of the change in the oxidation state of this atom.

.....

.....

(1)

(e) Using the information given in the table, deduce an equation for the redox reaction that would occur when hydroxide ions are added to HOCl

.....

.....

.....

(2)

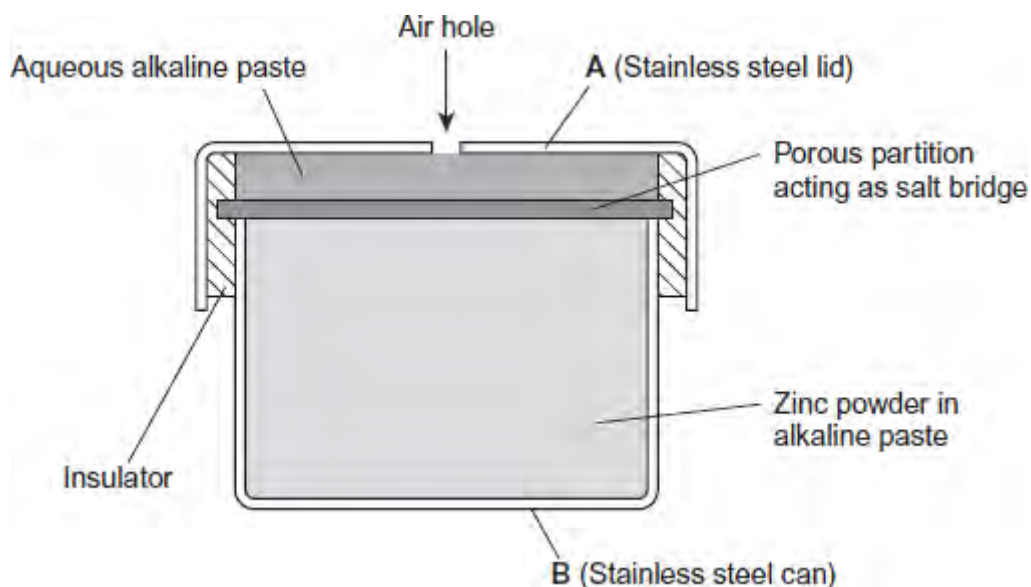
(f) The table is repeated to help you answer this question.

	E^\ominus / V
$\text{ZnO(s)} + \text{H}_2\text{O(l)} + 2\text{e}^- \longrightarrow \text{Zn(s)} + 2\text{OH}^-(\text{aq})$	-1.25

$\text{Fe}^{2+}(\text{aq}) + 2\text{e}^{-} \longrightarrow \text{Fe}(\text{s})$	-0.44
$\text{O}_2(\text{g}) + 2\text{H}_2\text{O}(\text{l}) + 4\text{e}^{-} \longrightarrow 4\text{OH}^{-}(\text{aq})$	+0.40
$2\text{HOCl}(\text{aq}) + 2\text{H}^{+}(\text{aq}) + 2\text{e}^{-} \longrightarrow \text{Cl}_2(\text{g}) + 2\text{H}_2\text{O}(\text{l})$	+1.64

The half-equations from the table that involve zinc and oxygen are simplified versions of those that occur in hearing aid cells.

A simplified diagram of a hearing aid cell is shown in the following figure.



(i) Use data from the table to calculate the e.m.f. of this cell.

.....

Answer =

(1)

(ii) Use half-equations from the table to construct an overall equation for the cell reaction.

.....

(1)

- (iii) Identify which of **A** or **B**, in the figure, is the positive electrode. Give a reason for your answer.

Positive electrode

Reason

.....

(2)

- (iv) Suggest **one** reason, other than cost, why this type of cell is **not** recharged.

.....

(1)

(Total 14 marks)

Q5. Fuel cells are an increasingly important energy source for vehicles. Standard electrode potentials are used in understanding some familiar chemical reactions including those in fuel cells.

The following table contains some standard electrode potential data.

Electrode half-equation	E^\ominus / V
$\text{F}_2 + 2\text{e}^- \longrightarrow 2\text{F}^-$	+2.87
$\text{Cl}_2 + 2\text{e}^- \longrightarrow 2\text{Cl}^-$	+1.36
$\text{O}_2 + 4\text{H}^+ + 4\text{e}^- \longrightarrow 2\text{H}_2\text{O}$	+1.23
$\text{Br}_2 + 2\text{e}^- \longrightarrow 2\text{Br}^-$	+1.07
$\text{I}_2 + 2\text{e}^- \longrightarrow 2\text{I}^-$	+0.54
$\text{O}_2 + 2\text{H}_2\text{O} + 4\text{e}^- \longrightarrow 4\text{OH}^-$	+0.40
$\text{SO}_4^{2-} + 4\text{H}^+ + 2\text{e}^- \longrightarrow \text{SO}_2 + 2\text{H}_2\text{O}$	+0.17
$2\text{H}^+ + 2\text{e}^- \longrightarrow \text{H}_2$	0.00
$4\text{H}_2\text{O} + 4\text{e}^- \longrightarrow 4\text{OH}^- + 2\text{H}_2$	-0.83

(a) A salt bridge was used in a cell to measure electrode potential.

Explain the function of the salt bridge.

.....
.....
.....
.....

(2)

(b) Use data from the table above to deduce the halide ion that is the weakest reducing agent.

.....

(1)

(c) Use data from the table to justify why sulfate ions should **not** be capable of oxidising bromide ions.

.....
.....
.....

(1)

(d) Use data from the table to calculate a value for the EMF of a hydrogen–oxygen fuel cell operating under alkaline conditions.

EMF = V

(1)

- (e) There are two ways to use hydrogen as a fuel for cars. One way is in a fuel cell to power an electric motor, the other is as a fuel in an internal combustion engine.

Suggest the major advantage of using the fuel cell.

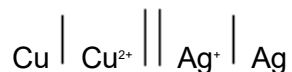
.....

.....

.....

(1)
(Total 6 marks)

Q6. The following cell has an EMF of +0.46 V.



Which statement is correct about the operation of the cell?

- A** Metallic copper is oxidised by Ag^+ ions.
- B** The silver electrode has a negative polarity.
- C** The silver electrode gradually dissolves to form Ag^+ ions.
- D** Electrons flow from the silver electrode to the copper electrode via an external circuit.

(Total 1 mark)