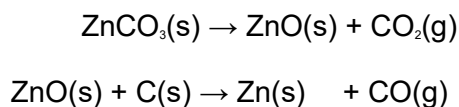


Q1. The method of extraction of zinc has changed as different ores containing the element have been discovered and as technology has improved.

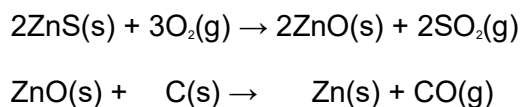
Extraction process 1

In the earliest process, calamine (impure zinc carbonate) was heated with charcoal in earthenware pots. This two-stage process gave a low yield of zinc.



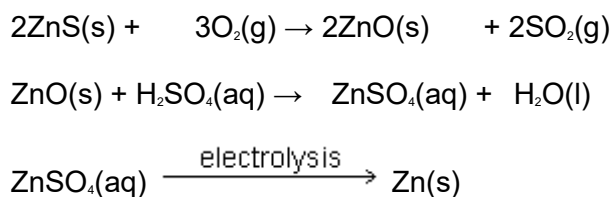
Extraction process 2

Deposits of calamine were being used up and a new two-stage process was developed using zinc sulfide ores. All of the waste gases from this process were released into the atmosphere.

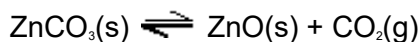


Extraction process 3

The modern process uses the electrolysis of aqueous solutions of very pure zinc sulfate. The first step in this process is the same as the first step in Extraction process 2. The second step uses sulfuric acid made from the SO₂ collected in the first step. The third step involves the electrolysis of zinc sulfate solution to form pure zinc.



(a) In the first stage of Extraction process 1 the following equilibrium is established when zinc carbonate is heated in a closed container.



Use Le Chatelier's principle to suggest and explain the effect on the yield of zinc oxide of allowing the carbon dioxide to escape from the container.

.....

.....

.....

.....
.....
.....

(3)

- (b) State and explain **one** environmental reason why Extraction process **3** is an improvement over Extraction process **2**.

.....
.....
.....
.....
.....
.....

(3)

- (c) Give **one** reason why Extraction process **3** is an expensive method of making zinc but one which is justified in terms of the product formed.

.....
.....
.....
.....

(2)

- (d) Deduce the half-equation for the formation of zinc from zinc ions during the electrolysis of zinc sulfate solution and identify the electrode at which this reaction occurs.

.....
.....
.....
.....

(2)

- (e) Identify **one** reaction from the three extraction processes that is **not** a redox reaction and state the type of reaction that it is. In terms of redox, state what happens to the carbon in Extraction process 2.

.....

.....

.....

.....

.....

.....

(3)

- (f) Zinc and magnesium both react with steam in a similar way. Write an equation for the reaction of zinc with steam and name the products of this reaction.

.....

.....

.....

.....

(2)

(Total 15 marks)

Q2. The electrons transferred in redox reactions can be used by electrochemical cells to provide energy.

Some electrode half-equations and their standard electrode potentials are shown in the table below.

Half-equation	E^{\ominus}/V
$\text{Cr}_2\text{O}_7^{2-}(\text{aq}) + 14\text{H}^+(\text{aq}) + 6\text{e}^- \rightarrow 2\text{Cr}^{3+}(\text{aq}) + 7\text{H}_2\text{O}(\text{l})$	+1.33
$\text{Fe}^{3+}(\text{aq}) + \text{e}^- \rightarrow \text{Fe}^{2+}(\text{aq})$	+0.77

$2\text{H}^+(\text{aq}) + 2\text{e}^- \rightarrow \text{H}_2(\text{g})$	0.00
$\text{Fe}^{2+}(\text{aq}) + 2\text{e}^- \rightarrow \text{Fe}(\text{s})$	-0.44
$\text{Li}^+(\text{aq}) + \text{e}^- \rightarrow \text{Li}(\text{s})$	-3.04

(a) Describe a standard hydrogen electrode.

.....

.....

.....

.....

.....

.....

.....

(4)

(b) A conventional representation of a lithium cell is given below.
This cell has an e.m.f. of +2.91 V



Write a half-equation for the reaction that occurs at the positive electrode of this cell.

Calculate the standard electrode potential of this positive electrode.

.....

.....

.....

.....

.....

.....

(2)

(c) Suggest what reactions occur, if any, when hydrogen gas is bubbled into a solution containing a mixture of iron(II) and iron(III) ions. Explain your answer.

.....

.....
.....
.....

(2)

- (d) A solution of iron(II) sulfate was prepared by dissolving 10.00 g of $\text{FeSO}_4 \cdot 7\text{H}_2\text{O}$ ($M_r = 277.9$) in water and making up to 250 cm^3 of solution. The solution was left to stand, exposed to air, and some of the iron(II) ions became oxidised to iron(III) ions. A 25.0 cm^3 sample of the partially oxidised solution required 23.70 cm^3 of 0.0100 mol dm^{-3} potassium dichromate(VI) solution for complete reaction in the presence of an excess of dilute sulfuric acid.

Calculate the percentage of iron(II) ions that had been oxidised by the air.

.....
.....
.....
.....
.....
.....
.....
.....
.....
.....
.....
.....
.....
.....
.....
.....
.....
.....
.....
.....
.....

(6)

(Total 14 marks)

- Q3.(a)** When a solution containing iron(II) ions is treated with a slight excess of a solution containing ethanedioate ions a bright yellow precipitate of hydrated iron(II)

ethanedioate, $\text{FeC}_2\text{O}_4 \cdot 2\text{H}_2\text{O}$, is formed. The precipitate is filtered off, washed with propanone and then allowed to dry. A typical yield of the solid is 95%.

- (i) Propanone boils at 56°C and is miscible with water in all proportions. Suggest **two** reasons why washing with propanone is an effective method for producing a pure, dry precipitate.

Reason 1

.....

Reason 2

.....

(2)

- (ii) By suggesting a simple test tube reaction, state how the filtrate could be tested to show that all of the iron(II) ions have been removed from the solution. State what you would observe.

Test

Observation

(2)

- (iii) Suggest **one** reason why the typical yield of iron(II) ethanedioate is less than 100%.

.....

.....

(1)

- (iv) Calculate the mass of hydrated iron(II) ethanedioate, $\text{FeC}_2\text{O}_4 \cdot 2\text{H}_2\text{O}$ that can be formed from 50.0 cm^3 of a 0.50 mol dm^{-3} solution of iron(II) sulfate when the yield of the reaction is 95%. Show your working.

.....

.....

.....

.....

.....

(3)

- (v) The identity of the precipitate can be confirmed by dissolving it in sulfuric acid and titrating the mixture with potassium manganate(VII).

Deduce the number of moles of iron(II) ethanedioate that would react with one mole of potassium manganate(VII) in acidic solution.

.....
.....

(1)

- (b) Ethanedioate ions can be used to remove calcium ions from blood plasma. A precipitate of calcium ethanedioate is formed. Write an ionic equation for the reaction of ethanedioate ions with calcium ions.

.....
.....

(1)

- (c) Ethanedioic acid is used to clean marble, a form of calcium carbonate. Suggest **one** reason why the reaction between ethanedioic acid and marble stops after a short time.

.....
.....

(1)

- (d) Tea leaves contain ethanedioic acid. Suggest **one** reason why tea drinkers do **not** suffer from ethanedioic acid poisoning.

.....

(1)

- (e) Ethanedioic acid is produced by the oxidation of carbon monoxide in a multi-step process. The equation which summarises the reactions taking place is shown below.



Calculate the percentage atom economy for the formation of ethanedioic acid in this reaction. Show your working.

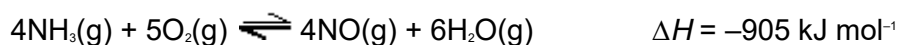
.....

.....
.....

(2)
(Total 14 marks)

Q4. Nitric acid is manufactured from ammonia in a process that involves several stages.

- (a) In the first stage, ammonia is converted into nitrogen monoxide and the following equilibrium is established.



The catalyst for this equilibrium reaction is a platinum–rhodium alloy in the form of a gauze. This catalyst gauze is heated initially but then remains hot during the reaction.

- (i) In terms of redox, state what happens to the ammonia in the forward reaction.

.....

(1)

- (ii) Suggest a reason why the catalyst must be hot.

.....

(1)

- (iii) Suggest a reason why the catalyst remains hot during the reaction.

.....

(1)

- (iv) State how a catalyst increases the rate of a reaction.

.....

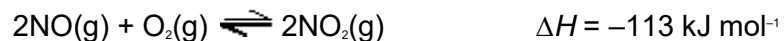
.....

.....

.....

(2)

- (b) In the second stage, nitrogen monoxide is converted into nitrogen dioxide. The equation for the equilibrium that is established is shown below.



Explain why the equilibrium mixture is cooled during this stage of the process.

.....

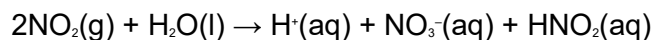
.....

.....

.....

(2)

- (c) In the final stage, nitrogen dioxide reacts with water as shown by the following equation.



Give the oxidation state of nitrogen in each of the following.

NO_2

NO_3^-

HNO_2

(3)

(Total 10 marks)