

Q1. This question is about the primary amine $\text{CH}_3\text{CH}_2\text{CH}_2\text{NH}_2$

(a) The amine $\text{CH}_3\text{CH}_2\text{CH}_2\text{NH}_2$ reacts with CH_3COCl

Name and outline a mechanism for this reaction.

Give the IUPAC name of the organic product.

.....
.....

(6)

(b) Isomers of $\text{CH}_3\text{CH}_2\text{CH}_2\text{NH}_2$ include another primary amine, a secondary amine and a tertiary amine.

(i) Draw the structures of these **three** isomers.
Label each structure as primary, secondary or tertiary.

(3)

- (ii) Use **Table 1** on the Data Sheet to explain how you could use infrared spectra in the range outside the fingerprint region to distinguish between the secondary amine and the tertiary amine.

.....
.....
.....
.....
.....

(2)

- (c) The amine $\text{CH}_3\text{CH}_2\text{CH}_2\text{NH}_2$ can be prepared by two different routes.

Route **A** is a two-stage process and starts from $\text{CH}_3\text{CH}_2\text{Br}$.

Route **B** is a one-stage process and starts from $\text{CH}_3\text{CH}_2\text{CH}_2\text{Br}$.

- (i) Identify the intermediate compound in Route **A**.

Give the reagents and conditions for both stages in Route **A** and the single stage in Route **B**.

.....
.....
.....
.....
.....
.....
.....
.....
.....
.....
.....
.....
.....
.....
.....

.....
.....
.....
.....

(7)

(ii) Give **one** disadvantage of Route **A** and **one** disadvantage of Route **B**.

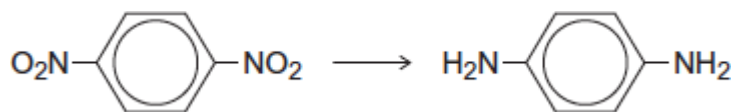
.....
.....
.....
.....

(2)

(Total 20 marks)

Q2. Each of the following conversions involves reduction of the starting material.

(a) Consider the following conversion.



Identify a reducing agent for this conversion.

Write a balanced equation for the reaction using molecular formulae for the nitrogen-containing compounds and [H] for the reducing agent.

Draw the repeating unit of the polymer formed by the product of this reaction with benzene-1,4-dicarboxylic acid.

.....
.....
.....
.....
.....
.....
.....
.....

(Extra space)

.....

.....

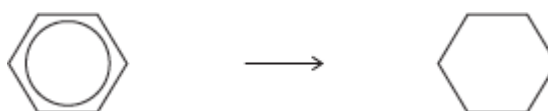
.....

.....

.....

(5)

- (b) Consider the following conversion.



Identify a reducing agent for this conversion.

State the empirical formula of the product.

State the bond angle between the carbon atoms in the starting material and the bond angle between the carbon atoms in the product.

.....

.....

.....

.....

.....

.....

(4)

- (c) The reducing agent in the following conversion is NaBH_4



- (i) Name and outline a mechanism for the reaction.

Name of mechanism

Mechanism

(5)

- (ii) By considering the mechanism of this reaction, explain why the product formed is optically inactive.

.....

.....

.....

.....

.....

.....

.....

.....

.....

(3)

(Total 17 marks)

Q3. The amide or peptide link is found in synthetic polyamides and also in naturally occurring proteins.

- (a) (i) Draw the repeating unit of the polyamide formed by the reaction of propanedioic acid with hexane-1,6-diamine.

(2)

- (ii) In terms of the intermolecular forces between the polymer chains, explain why polyamides can be made into fibres suitable for use in sewing and weaving, whereas polyalkenes usually produce fibres that are too weak for this purpose.

.....
.....
.....
.....
.....
.....

(Extra space)
.....
.....

(3)

- (b) (i) Name and outline a mechanism for the reaction of $\text{CH}_3\text{CH}_2\text{COCl}$ with CH_3NH_2
Name of mechanism.....
Mechanism

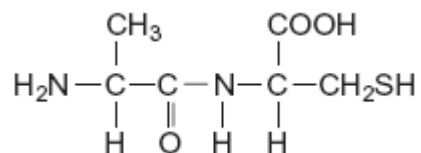
(5)

- (ii) Give the name of the product containing an amide linkage that is formed in the reaction in part (b) (i).

.....

(1)

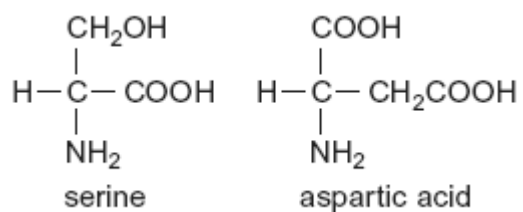
(c) The dipeptide shown below is formed from two different amino acids.



Draw the structure of the alternative dipeptide that could be formed by these two amino acids.

(1)

(d) The amino acids serine and aspartic acid are shown below.



(i) Give the IUPAC name of serine.

.....

(1)

(ii) Draw the structure of the species formed when aspartic acid reacts with aqueous sodium hydroxide.

(1)

- (iii) Draw the structure of the species formed when serine reacts with dilute hydrochloric acid.

(1)

- (iv) Draw the structure of the species formed when serine reacts with an excess of bromomethane.

(1)
(Total 16 marks)