

Please write clearly in block capitals.

Centre number

--	--	--	--	--

Candidate number

--	--	--	--

Surname

Forename(s)

Candidate signature

I declare this is my own work.

GCSE CHEMISTRY

F

Foundation Tier Paper 1

Monday 22 May 2023

Morning

Time allowed: 1 hour 45 minutes

Materials

For this paper you must have:

- a ruler
- a scientific calculator
- the periodic table (enclosed).

Instructions

- Use black ink or black ball-point pen.
- Pencil should only be used for drawing.
- Fill in the boxes at the top of this page.
- Answer **all** questions in the spaces provided. Do not write outside the box around each page or on blank pages.
- If you need extra space for your answer(s), use the lined pages at the end of this book. Write the question number against your answer(s).
- Do all rough work in this book. Cross through any work you do not want to be marked.
- In all calculations, show clearly how you work out your answer.

Information

- The maximum mark for this paper is 100.
- The marks for questions are shown in brackets.
- You are expected to use a calculator where appropriate.
- You are reminded of the need for good English and clear presentation in your answers.

For Examiner's Use	
Question	Mark
1	
2	
3	
4	
5	
6	
7	
8	
9	
10	
11	
TOTAL	



0 1

This question is about atoms.

Atoms contain three types of particle:

- electrons
- neutrons
- protons.

0 1 . 1

Which particle has no electrical charge?

[1 mark]Tick (✓) **one** box.

Electron

Neutron

Proton

0 1 . 2

Which particles have the same relative mass?

[1 mark]Tick (✓) **one** box.

An electron and a neutron

An electron and a proton

A neutron and a proton

0 1 . 3The formula of a compound is N_2O How many of each type of atom are in one molecule of N_2O ?**[2 marks]**

Nitrogen _____

Oxygen _____



An atom of element **Z** contains:

- 3 electrons
- 4 neutrons
- 3 protons.

0 1 . 4 Give the name of element **Z**.

Use the periodic table.

[1 mark]

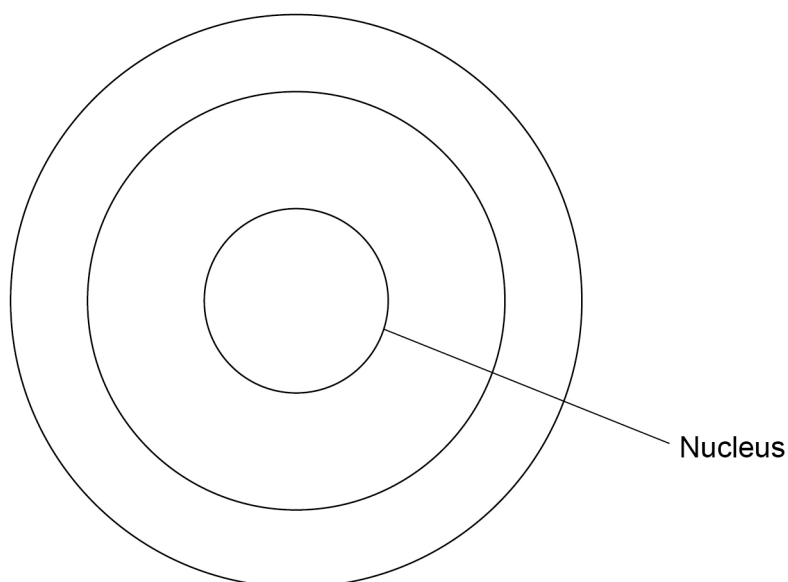
0 1 . 5 Complete **Figure 1** to show the position of the particles in an atom of element **Z**.

Use the symbols:

- × = electron
- = neutron
- = proton

[4 marks]

Figure 1



Turn over for the next question

9

Turn over ►



There are no questions printed on this page

*Do not write
outside the
box*

**DO NOT WRITE ON THIS PAGE
ANSWER IN THE SPACES PROVIDED**



0 2

This question is about acids and alkalis.

0 2 . 1

Acids and alkalis are substances that produce ions in aqueous solution.

Draw **one** line from each substance to the ion always produced by that substance in aqueous solution.**[2 marks]**

Substance	Ion always produced in aqueous solution
	<input type="text" value="Cl<sup>-</sup>"/>
<input type="text" value="Acid"/>	<input type="text" value="H<sup>+</sup>"/>
	<input type="text" value="Na<sup>+</sup>"/>
<input type="text" value="Alkali"/>	<input type="text" value="OH<sup>-</sup>"/>
	<input type="text" value="SO<sub>4</sub><sup>2-</sup>"/>

0 2 . 2

What type of aqueous solution has a pH of 11?

[1 mark]Tick (✓) **one** box.

Acidic

Alkaline

Neutral

Question 2 continues on the next page**Turn over ►**

A student determined the reacting volumes of hydrochloric acid and sodium hydroxide solution by titration.

This is the method used.

1. Measure 25.0 cm³ of the sodium hydroxide solution.
2. Add the sodium hydroxide solution to a conical flask.
3. Add 3 drops of indicator to the sodium hydroxide solution.
4. Add the hydrochloric acid drop by drop until the indicator changes colour.
5. Record the volume of the hydrochloric acid added.
6. Repeat steps 1 to 5 three more times.

0 2 . 3 Which piece of equipment should be used to measure 25.0 cm³ of the sodium hydroxide solution in step 1?

[1 mark]

Tick (✓) **one** box.

Beaker

Pipette

Ruler

0 2 . 4 Which piece of equipment should be used to add the hydrochloric acid drop by drop in step 4?

[1 mark]

Tick (✓) **one** box.

Balance

Burette

Measuring cylinder



Table 1 shows the results.

Table 1

Trial	1	2	3	4
Volume of hydrochloric acid added in cm ³	24.3	24.5	28.1	24.4

0 2 . 5 Which is the anomalous result in Table 1?

[1 mark]

Trial 1 Trial 2 Trial 3 Trial 4

0 2 . 6 Suggest **one** reason for the anomalous result in Table 1.

[1 mark]

0 2 . 7 The student used a solution of sodium hydroxide of concentration 4.00 g/dm³.

Calculate the mass of sodium hydroxide in 25.0 cm³ of this solution.

$$1 \text{ dm}^3 = 1000 \text{ cm}^3$$

[3 marks]

Mass = _____ g

10

Turn over ►



0 3 This question is about carbon.

0 3 . 1 Which type of substance is carbon?

[1 mark]

Tick (✓) **one** box.

Compound

Element

Mixture

0 3 . 2 Carbon has isotopes with mass numbers 12, 13 and 14.

Complete the sentences.

Choose answers from the box.

[2 marks]

electrons

ions

molecules

neutrons

protons

The isotopes of carbon have the same number of _____.

The isotopes of carbon have a different number of _____.



0 3 . 3 12 g of carbon contains 6.02×10^{23} atoms.

Which expression is used to calculate the mass of one atom of carbon?

[1 mark]

Tick (✓) **one** box.

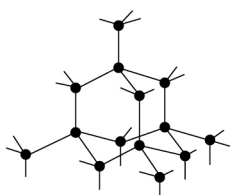
$$\frac{12}{6.02 \times 10^{23}} \quad \square$$

$$\frac{6.02 \times 10^{23}}{12} \quad \square$$

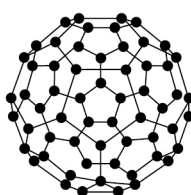
$$12 \times 6.02 \times 10^{23} \quad \square$$

0 3 . 4 **Figure 2** shows diagrams that represent different forms of carbon.


Figure 2



A



B



C

Which diagram in **Figure 2** represents Buckminsterfullerene?

[1 mark]

Tick (✓) **one** box.

A

B

C

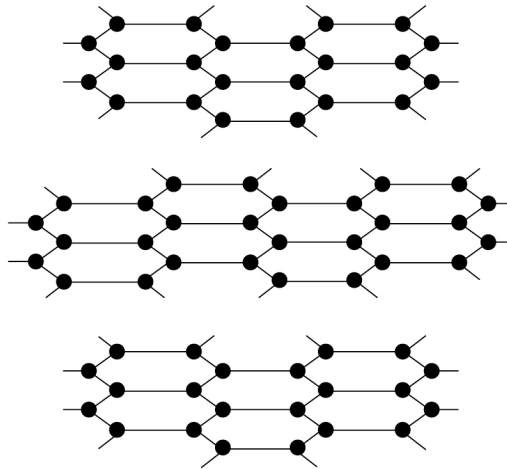
Question 3 continues on the next page

Turn over ►



0 3 . 5 Figure 3 represents part of the structure of graphite.

Figure 3



Draw **one** line from each property of graphite to the structural feature that is the reason for that property.

[2 marks]

Property	Structural feature
Graphite conducts electricity.	Graphite has hexagonal rings of carbon atoms.
Graphite is soft.	The bonds between carbon atoms in the layers are strong.
	There are no covalent bonds between layers of atoms.
	There are delocalised electrons in graphite.



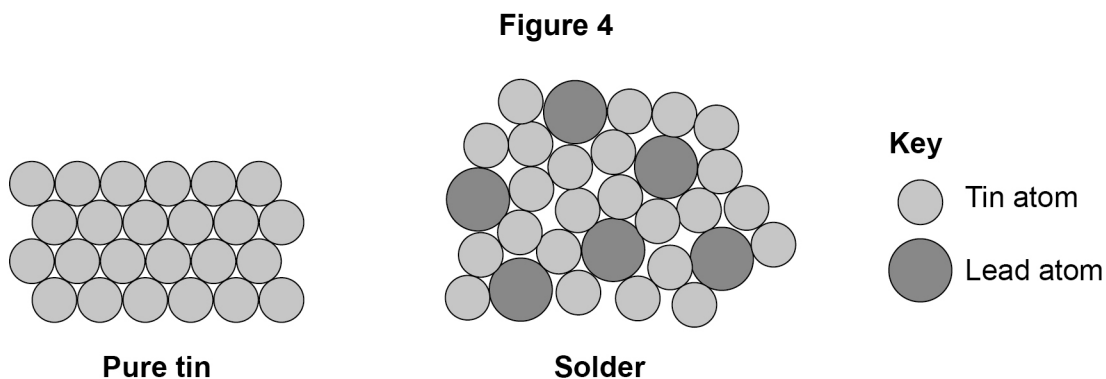
0 4

This question is about alloys.

Solders are alloys of tin and lead.

Different solders have different percentages of tin and lead.

Figure 4 shows the arrangement of atoms in pure tin and in a solder.



0 4 . 1

The solder in **Figure 4** has 6 lead atoms for every 24 tin atoms.

Determine the percentage of atoms that are lead atoms in the solder in **Figure 4**.

[3 marks]

Percentage of lead atoms = _____ %

0 4 . 2

Explain why solder is harder than pure tin.

Complete the sentences.

Use **Figure 4**.

[2 marks]

In solder the layers are distorted.

This is because the atoms of tin and lead have different _____.

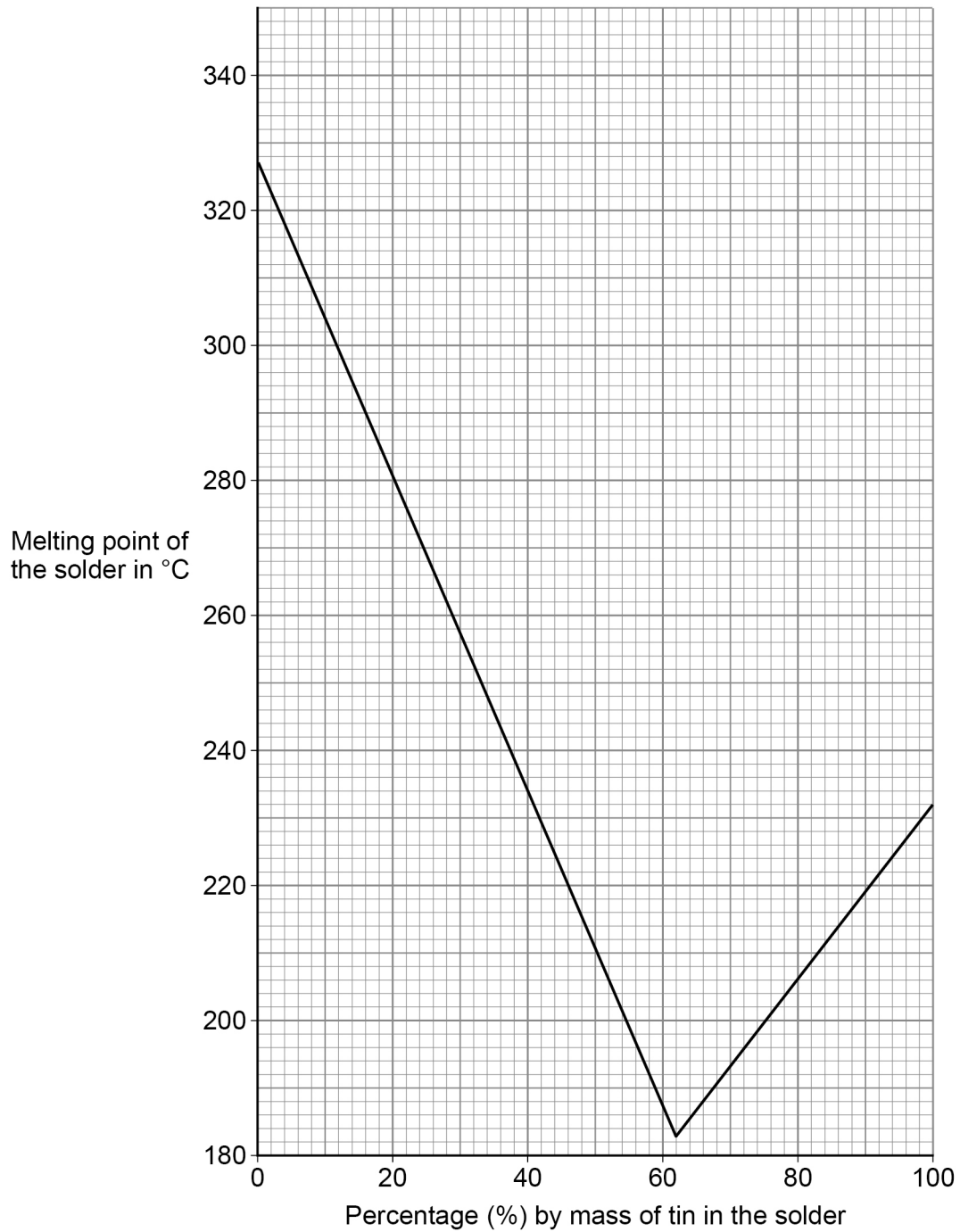
Therefore the layers cannot easily _____.

Turn over ►



Figure 5 shows how the melting point of the solder changes with the percentage by mass of tin in the solder.

Figure 5



0 4 . 3

Describe what happens to the melting point of the solder as the percentage by mass of tin increases.

Use data from **Figure 5**.

[3 marks]

0 4 . 4

What is the melting point of pure tin?

Use **Figure 5**.

[1 mark]

Melting point of pure tin = _____ °C

0 4 . 5

What happens to the atoms in pure tin as the tin melts?

[1 mark]

Tick (✓) **one** box.

The atoms gain energy and their arrangement becomes less ordered.

The atoms gain energy and their arrangement becomes more ordered.

The atoms lose energy and their arrangement becomes less ordered.

The atoms lose energy and their arrangement becomes more ordered.

10

Turn over ►



0 5

This question is about small particles.

0 5 . 1

Which type of particle is often referred to as dust?

[1 mark]Tick (✓) **one** box.

Coarse particle

Fine particle

Nanoparticle

0 5 . 2

A spherical coarse particle has a diameter of 4000 nm.

A spherical fine particle has a diameter of 200 nm.

How many times larger is the diameter of the coarse particle than the diameter of the fine particle?

[1 mark]Tick (✓) **one** box.

2 times

5 times

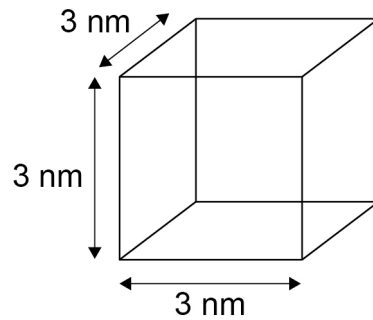
20 times

50 times



0 5 . 3 Figure 6 represents a cubic nanoparticle.

Figure 6



The volume of the cubic nanoparticle is 27 nm^3 .

Calculate:

- the surface area of the cubic nanoparticle
- the simplest whole number ratio of surface area : volume for the cubic nanoparticle.

Use the equation:

$$\text{surface area of cubic nanoparticle} = 6 \times \text{surface area of one face}$$

[4 marks]

Surface area of cubic nanoparticle = _____ nm^2

Simplest whole number ratio of surface area : volume = _____ : 1

Question 5 continues on the next page

Turn over ►



Titanium oxide is used in some sun creams.

0 5 . 4

Which is an advantage of using nanoparticles of titanium oxide rather than normal-sized particles of titanium oxide in sun creams?

[1 mark]

Tick (✓) **one** box.

A smaller mass of nanoparticles is needed to be effective.

Nanoparticles cost more than the same mass of normal-sized particles.

Nanoparticles have a lower surface area to volume ratio than normal-sized particles.

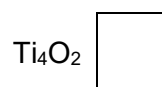
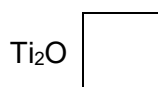
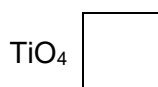
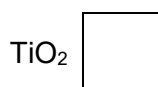
0 5 . 5

Titanium oxide contains Ti^{4+} ions and O^{2-} ions.

What is the formula of titanium oxide?

[1 mark]

Tick (✓) **one** box.



8



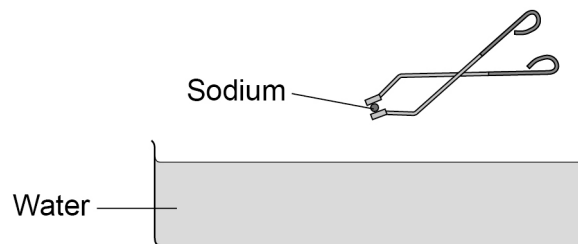
0 6

This question is about metals.

0 6 . 1

Platinum is used to make jewellery.

Suggest **one** reason why platinum is used to make jewellery.**[1 mark]**

0 6 . 2**Figure 7** shows a piece of sodium being added to water.**Figure 7**Give **two** observations that could be seen when sodium is added to water.**[2 marks]**1

2

Question 6 continues on the next page**Turn over ►**

0 6 . 3 Copper is a transition element.

Sodium is a Group 1 element.

What are **two** differences between copper and sodium?

[2 marks]

Tick (✓) **two** boxes.

Copper has a lower melting point.

Copper is harder.

Copper is less dense.

Copper is less reactive.

Copper is less strong.



0 7

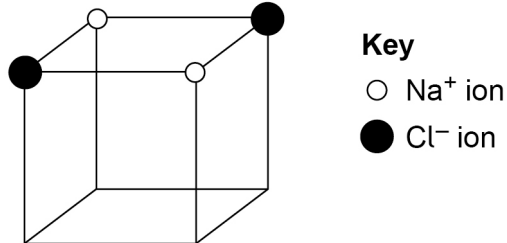
This question is about ionic compounds and electrolysis.

Sodium chloride is an ionic compound.

0 7 . 1

Figure 8 represents part of the structure of solid sodium chloride.

Figure 8



Complete **Figure 8**.

[2 marks]

0 7 . 2

Give **one** reason why molten sodium chloride conducts electricity.

Refer to ions in your answer.

[1 mark]

0 7 . 3

Table 3 shows products of the electrolysis of two molten ionic compounds.

Complete **Table 3**.

[2 marks]

Table 3

Molten compound	Product at the negative electrode	Product at the positive electrode
Magnesium bromide	Magnesium	_____
Potassium chloride	_____	Chlorine



0 7 . 4 Aluminium is extracted by electrolysis.

The electrolyte is a molten mixture of aluminium oxide and cryolite.

Why is a mixture used instead of pure aluminium oxide as the electrolyte?

[1 mark]

Tick (✓) **one** box.

The mixture has a lower melting point than pure aluminium oxide.

The mixture has the same melting point as pure aluminium oxide.

The mixture has a higher melting point than pure aluminium oxide.

0 7 . 5 Electrolysis of an aqueous solution of sodium sulfate produces hydrogen and oxygen.

What is the source of the hydrogen and the oxygen produced during the electrolysis of aqueous sodium sulfate solution?

[1 mark]

Tick (✓) **one** box.

Air

Sulfate ions

Water

Question 7 continues on the next page

Turn over ►



Electrolysis of an aqueous solution of sodium sulfate produces hydrogen and oxygen.

0 7 . 6 Why is hydrogen produced instead of sodium in the electrolysis of aqueous sodium sulfate solution?

[1 mark]

Tick (✓) **one** box.

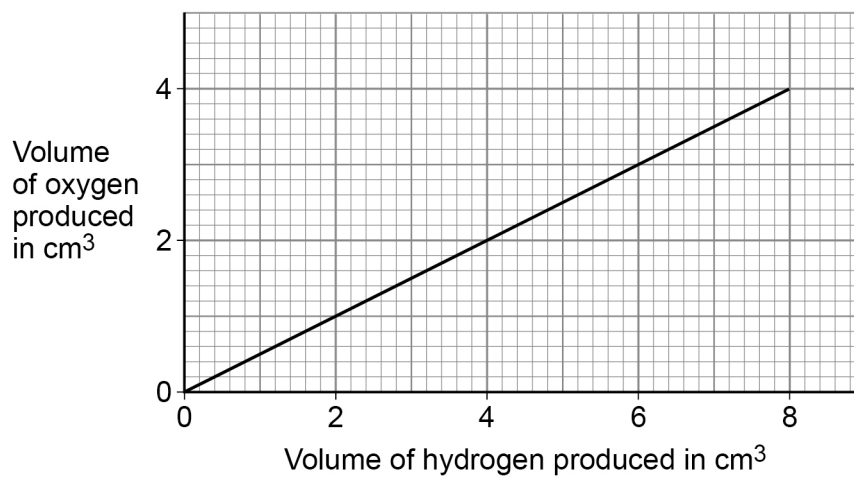
Hydrogen is less reactive than sodium.

Hydrogen has the same reactivity as sodium.

Hydrogen is more reactive than sodium.

0 7 . 7 **Figure 9** shows the relationship between the volume of hydrogen and the volume of oxygen produced during the electrolysis.

Figure 9



Give **one** conclusion that can be made about the volume of hydrogen produced compared to the volume of oxygen produced.

[1 mark]




0 8

This question is about displacement reactions.

Iron is extracted from iron oxide by a displacement reaction with carbon.

0 8 . 1

Balance the equation for the reaction.

[2 marks]**0 8 . 2**

Iron oxide is reduced in this reaction.

How does the equation show that iron oxide is reduced?


[1 mark]

0 8 . 3Calculate the relative formula mass (M_r) of Fe_2O_3 Relative atomic masses (A_r): O = 16 Fe = 56**[2 marks]**

 $M_r = \underline{\hspace{2cm}}$ **Question 8 continues on the next page****Turn over ►**

0 8 . 4 Copper oxide reacts with hydrogen to produce copper.

The equation for the reaction is:



Calculate the percentage atom economy for obtaining copper from this reaction.

Use the equation:

$$\text{Percentage atom economy} = \frac{A_r \text{ of Cu}}{M_r \text{ of H}_2 + M_r \text{ of CuO}} \times 100$$

Relative atomic mass (A_r): Cu = 63.5

Relative formula masses (M_r): H₂ = 2 CuO = 79.5

[2 marks]

Percentage atom economy = _____ %

A student investigated the reactivity of four different metals, **A**, **B**, **C** and **D**.

The student:

- added each metal to aqueous solutions of each of the metal sulfates
- observed whether a reaction took place.

0 8 . 5 Give **one** observation that would show a reaction took place.

[1 mark]



0 8 . 6 Table 4 shows the results.

Table 4

Metal	Metal sulfate solution			
	A sulfate	B sulfate	C sulfate	D sulfate
A	×	×	✓	×
B	✓	×	✓	×
C	×	×	×	×
D	✓	✓	✓	×

✓ shows that a displacement reaction took place.
 × shows that a displacement reaction did not take place.

Write metals **A**, **B**, **C** and **D** in order of reactivity.

Give a reason for your order of reactivity.

[2 marks]

Most reactive _____

Least reactive _____

Reason _____

10

Turn over for the next question

Turn over ►



0 9

Discoveries in chemistry led to a better understanding of atomic structure.

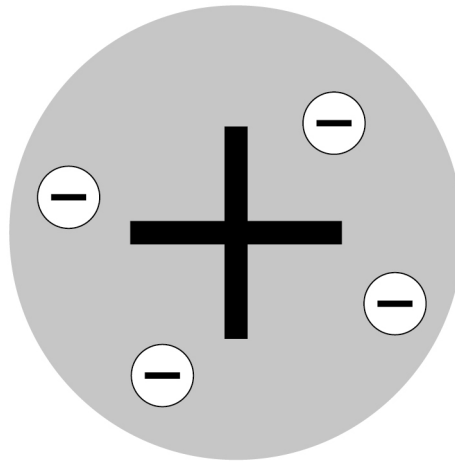
0 9 . 1

Atoms were originally thought to be tiny spheres that could not be divided.

The plum pudding model of the atom was then developed.

Figure 10 represents the plum pudding model of the atom.

Figure 10



Describe the plum pudding model of the atom.

[2 marks]

0 9 . 2

Atoms contain electrons, neutrons and protons.

Write these three particles in order of their discovery.

[1 mark]

Earliest _____

Latest _____



Very few atoms of the element tennessine (Ts) have ever been identified.

The atomic number of tennessine is 117

0 9 . 3 Predict the number of outer shell electrons in an atom of tennessine.

Give **one** reason for your answer.

Use the periodic table.

[2 marks]

Number of outer shell electrons _____

Reason _____

0 9 . 4 Tennessine was first identified by a small group of scientists in 2010.

Suggest **one** reason why tennessine was **not** accepted as a new element by other scientists until 2015.

[1 mark]

Question 9 continues on the next page

Turn over ►



0 9 . 5

The discovery of isotopes explained why some relative atomic masses are not whole numbers.

Element **R** has two isotopes.

Table 5 shows the mass numbers and percentage abundances of the isotopes of element **R**.

Table 5

Mass number	Percentage abundance (%)
6	7.6
7	92.4

Calculate the relative atomic mass (A_r) of element **R**.

Give your answer to 1 decimal place.

[3 marks]

Relative atomic mass (1 decimal place) = _____

9



Turn over for the next question

*Do not write
outside the
box*

**DO NOT WRITE ON THIS PAGE
ANSWER IN THE SPACES PROVIDED**

Turn over ►



1 0

This question is about temperature changes.

A student investigated the change in temperature of a solution when different masses of ammonium nitrate were dissolved in water.

This is the method used.

1. Measure 200 cm³ of water into a polystyrene cup.
2. Measure the temperature of the water.
3. Add 4.0 g of ammonium nitrate to the water.
4. Stir the solution until all the ammonium nitrate has dissolved.
5. Measure the lowest temperature reached by the solution.
6. Repeat steps 1 to 5 with different masses of ammonium nitrate.

1 0 . 1

Give the independent variable and the dependent variable in the investigation.

[2 marks]

Independent variable _____

Dependent variable _____

Table 6 shows the results.

Table 6

Mass of ammonium nitrate added in grams	Lowest temperature of solution in °C
4.0	18.2
8.0	16.2
12.0	15.2
16.0	13.6
20.0	12.4
24.0	10.6

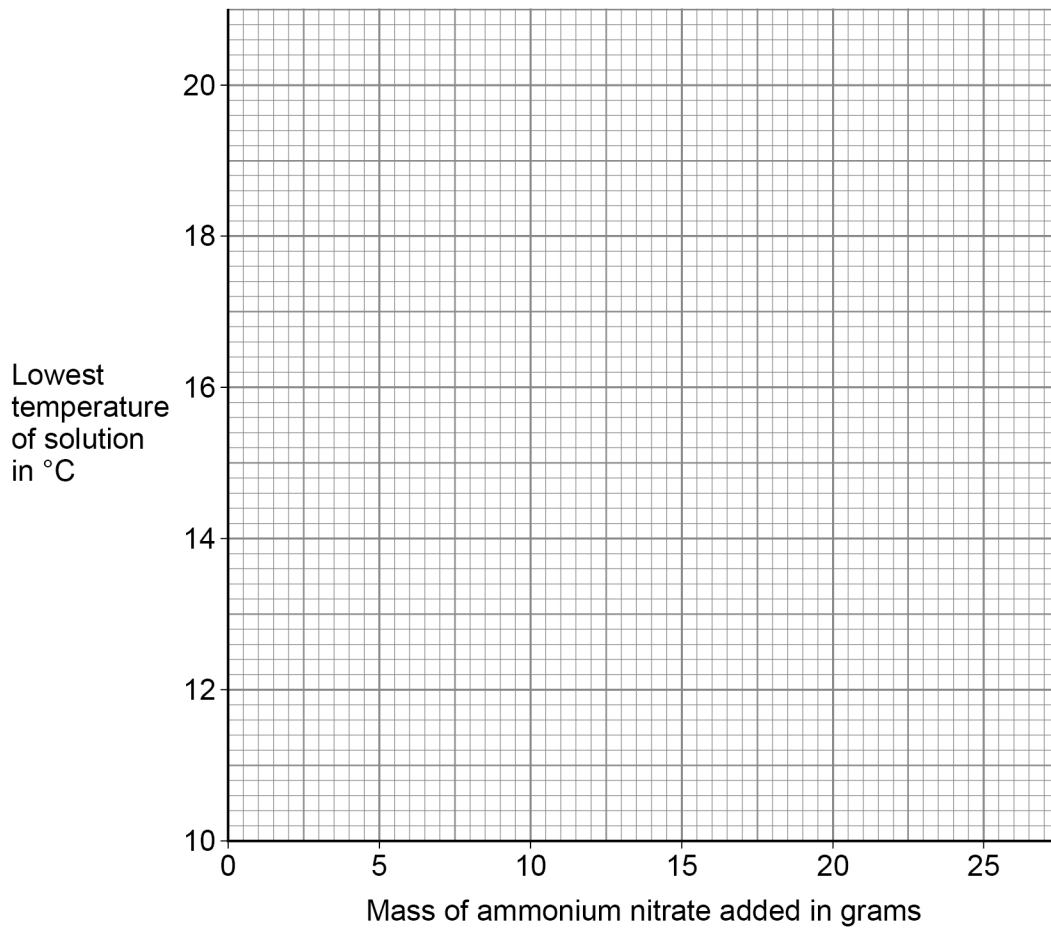


1 0 . 2 Plot the data from **Table 6** on **Figure 11**.

Draw a line of best fit.

[3 marks]

Figure 11



1 0 . 3 Determine the initial temperature of the water.

You should extend your line of best fit on **Figure 11**.

[2 marks]

Initial temperature of the water = _____ °C

1 0 . 4 How do the results show that dissolving ammonium nitrate in water is endothermic?

[1 mark]

Turn over ►



The student repeated the experiment three more times.

Table 7 shows the results for 8.0 g of ammonium nitrate.

Table 7

	Trial 1	Trial 2	Trial 3	Trial 4	Mean
Lowest temperature of solution in °C	16.2	16.6	16.8	16.4	16.5

1 0 . 5 The student recorded the mean lowest temperature of the solution for 8.0 g of ammonium nitrate as 16.5 ± 0.3 °C.

Explain why the student included ± 0.3 °C after the mean lowest temperature.

[2 marks]

1 0 . 6 What type of error is shown by the results in **Table 7**?

[1 mark]

Tick (✓) **one** box.

Random error

Systematic error

Zero error

11



There are no questions printed on this page

*Do not write
outside the
box*

**DO NOT WRITE ON THIS PAGE
ANSWER IN THE SPACES PROVIDED**



