

Please write clearly in block capitals.

Centre number

--	--	--	--	--

Candidate number

--	--	--	--

Surname

Forename(s)

Candidate signature

A-level PHYSICS

Paper 3

Section B Medical physics

Thursday 29 June 2017

Morning

Time allowed: The total time for both sections of this paper is 2 hours. You are advised to spend approximately 50 minutes on this section.

Materials

For this paper you must have:

- a pencil and a ruler
- a scientific calculator
- a Data and Formulae booklet.

Instructions

- Use **black ink** or **black ball-point pen**.
- **Fill** in the boxes at the top of this page.
- Answer **all** questions.
- You must answer the questions in the spaces provided. Do not write outside the box around each page or on blank pages.
- Do **all** rough work in this book. Cross through any work you do not want to be marked.
- Show **all** your working.

Information

- The marks for questions are shown in brackets.
- The maximum mark for this paper is 35.
- You are expected to use a scientific calculator where appropriate.
- A Data and Formulae Booklet is provided as a loose insert.

For Examiner's Use	
Question	Mark
1	
2	
3	
4	
TOTAL	



Section BAnswer **all** questions in this section.**0 1**

A person suffers from hypermetropia (long sight).
Use of a spectacle lens of power $+2.0\text{D}$ allows the person to just see clearly an object placed 24 cm away from the eye.

0 1 . 1

Explain why the unaided defective eye cannot form a clearly focused image of the object placed 24 cm from the eye.

[2 marks]

0 1 . 2

An object is placed 24 cm from the spectacle lens.

Calculate the distance of the image formed from the spectacle lens.
Give your answer to a suitable number of significant figures.

[3 marks]

image distance = _____ cm



0 1 . 3

What is the name for the position where the image is formed by the spectacle lens?

Tick (✓) the correct answer.

[1 mark]

The eye's aided far point

The eye's aided near point

The eye's unaided far point

The eye's unaided near point

0 1 . 4

Draw a ray diagram to show how this spectacle lens forms an image of the object placed 24 cm from the spectacle lens.

On your diagram clearly label the object, image and a principal focus of the lens.

Your diagram does not have to be drawn to scale.

[3 marks]

Turn over for the next question

9

Turn over ►



0 2 . 1

A patient with a suspected broken arm is going to have an X-ray image taken.

Explain the risk to the patient of exposure to X-rays.

Go on to discuss **three** ways by which the design and use of the X-ray equipment minimises this risk.

[6 marks]



0 **2** . **2**

The blood vessel called the aorta passes through the abdomen. A second patient with a suspected fault in the wall of the aorta can be given an ultrasound scan or an X-ray of the abdomen.

Suggest, with reasons, which is the better procedure for investigating this suspected fault.

[2 marks]

Question 2 continues on the next page

Turn over ►



0 2 . 3

When ultrasound travels across a boundary from blood to the wall of the aorta there is a decrease in acoustic impedance across the boundary. This results in 0.0625% of the intensity of the incident ultrasound being reflected at the boundary.

Calculate the acoustic impedance of the aorta wall tissue.

$$\text{acoustic impedance of blood} = 1.64 \times 10^6 \text{ kg m}^{-2} \text{ s}^{-1}$$

[4 marks]

acoustic impedance of aorta wall tissue = _____ $\text{kg m}^{-2} \text{ s}^{-1}$

12



Turn over for the next question

**DO NOT WRITE ON THIS PAGE
ANSWER IN THE SPACES PROVIDED**

Turn over ►



0 3

A patient is going to have a PET scan. A small amount of radioisotope is injected into the patient's bloodstream and the patient is left to relax. The patient then lies on a horizontal table and is moved into the PET scanner. The scanner has many detectors positioned in a vertical circular pattern around the patient.

0 3 . 1

State what is meant by a radioisotope.

[1 mark]

0 3 . 2

The radionuclide used in the PET scan has a physical half-life of 110 minutes. The radionuclide is excreted from the body with a biological half-life of 185 minutes.

Show that the effective half-life of the radionuclide in the body is about 70 minutes.

[1 mark]

0 3 . 3

Discuss what might be a suitable length of time for the patient to relax between injecting the radionuclide and moving the patient into the PET scanner.

[3 marks]

0 3 . 4

The decay of the radionuclide results in the emission of a positron. Two of the detectors, directly opposite to each other, are triggered as they each receive a gamma photon.

Explain the process in which the gamma photons are created.

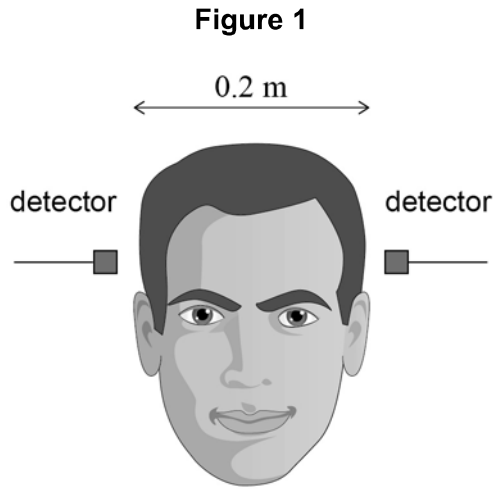
[2 marks]

Question 3 continues on the next page

Turn over ►

0 3 . 5

Figure 1 shows the head of a patient that is 0.2 m across, placed centrally between two of the many detectors in a PET scanner.



To determine the position where the gamma photons are produced between the detectors, the scanner measures the short interval of time Δt between the triggering of the first detector and the triggering of the second detector.

Discuss, for the detector positions shown in **Figure 1**, the range of the values of Δt that the scanner must measure to perform a PET scan on the head. Assume that the speed of the gamma photons in the head is $3 \times 10^8 \text{ m s}^{-1}$.

[2 marks]

9

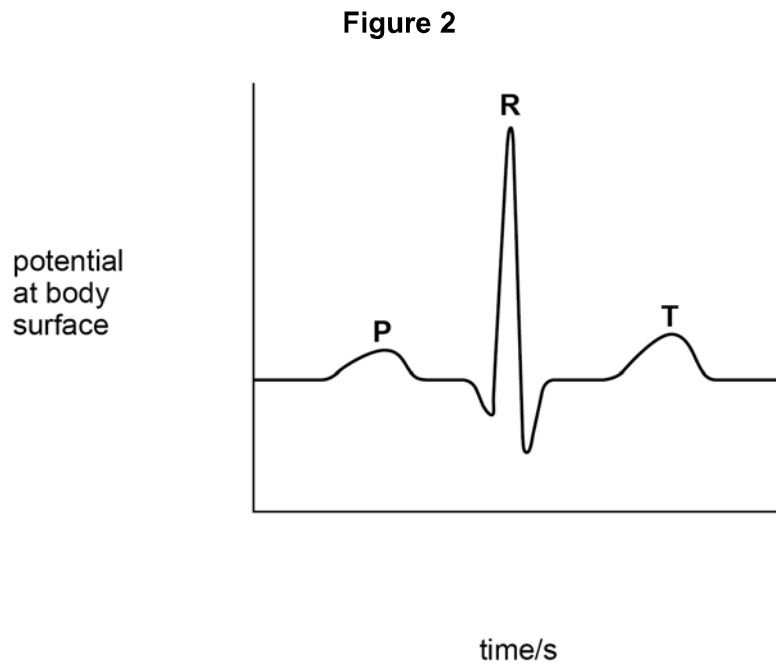


0 4 . 1

Figure 2 shows an ECG trace for a healthy person.

Complete **Figure 2** by adding a suitable unit and scale to the potential axis, and a suitable scale to the time axis.

[2 marks]



Question 4 continues on the next page

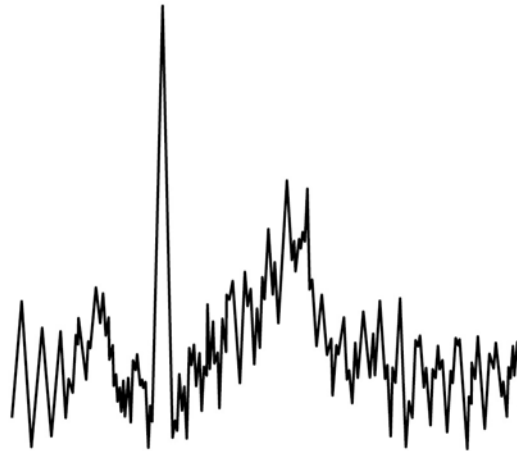
Turn over ►



0 4 . 2

Figure 3 shows a faulty ECG trace which was obtained for another healthy person.

Figure 3



Discuss **three** possible reasons why this faulty trace was obtained.

[3 marks]

5

END OF QUESTIONS

Copyright Information

For confidentiality purposes, from the November 2015 examination series, acknowledgements of third party copyright material will be published in a separate booklet rather than including them on the examination paper or support materials. This booklet is published after each examination series and is available for free download from www.aqa.org.uk after the live examination series.

Permission to reproduce all copyright material has been applied for. In some cases, efforts to contact copyright-holders may have been unsuccessful and AQA will be happy to rectify any omissions of acknowledgements. If you have any queries please contact the Copyright Team, AQA, Stag Hill House, Guildford, GU2 7XJ.

Copyright © 2017 AQA and its licensors. All rights reserved.

