

Please write clearly in block capitals.

Centre number

--	--	--	--	--

Candidate number

--	--	--	--

Surname

---

Forename(s)

---

Candidate signature

---

# A-level PHYSICS

Paper 3

Section B Turning points in physics

Monday 3 June 2019

Afternoon

Time allowed: The total time for both sections of this paper is 2 hours. You are advised to spend approximately 50 minutes on this section.

## Materials

For this paper you must have:

- a pencil and a ruler
- a scientific calculator
- a Data and Formulae Booklet.

## Instructions

- Use black ink or black ball-point pen.
- Fill in the boxes at the top of this page.
- Answer **all** questions.
- You must answer the questions in the spaces provided. Do not write outside the box around each page or on blank pages.
- If you need extra space for your answer(s), use the lined pages at the end of this book. Write the question number against your answer(s).
- Do **all** rough work in this book. Cross through any work you do not want to be marked.
- Show **all** your working.

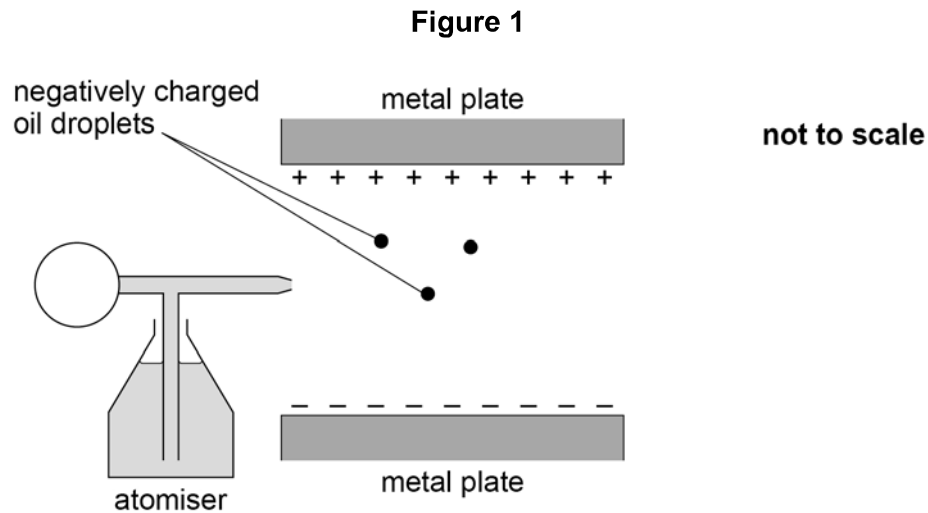
## Information

- The marks for questions are shown in brackets.
- The maximum mark for this paper is 35.
- You are expected to use a scientific calculator where appropriate.
- A Data and Formulae Booklet is provided as a loose insert.

For Examiner's Use

Question	Mark
1	
2	
3	
4	
<b>TOTAL</b>	



**Section B**Answer **all** questions in this section.**0 1****Figure 1** shows an experiment to measure the charge of the electron.

Negatively charged oil droplets are sprayed from the atomiser into the gap between the two horizontal metal plates. A potential difference is applied between the metal plates.

One of the droplets remains stationary.

**0 1 . 1**

Identify the forces acting on the stationary droplet.  
In your answer you should state the relationship between the forces.

The upthrust on the droplet due to the air it displaces is negligible.

**[2 marks]**


---



---



---



---



---



---



0	1	.	2
---	---	---	---

The potential difference between the plates is changed to zero and the droplet falls at a terminal velocity of  $1.0 \times 10^{-4} \text{ m s}^{-1}$ .

The density of the oil is  $880 \text{ kg m}^{-3}$

The viscosity of air is  $1.8 \times 10^{-5} \text{ N s m}^{-2}$

Show that the radius of the droplet is about  $1 \times 10^{-6} \text{ m}$ .

Assume that the droplet is spherical.

**[3 marks]**

Question 1 continues on the next page

Turn over ►



0 1 . 3

The potential difference between the plates is restored to its initial value and the droplet becomes stationary.

The charge on the droplet is  $-4.8 \times 10^{-19} \text{ C}$ .

A student suggests that, if the droplet splits into two spheres of equal size, both spheres would remain stationary.

Deduce whether this suggestion is correct.

**[3 marks]**

---

---

---

---

---

---

---

---

---

---

---

---

---

---

---

---

---

---

---

---

---

---

---

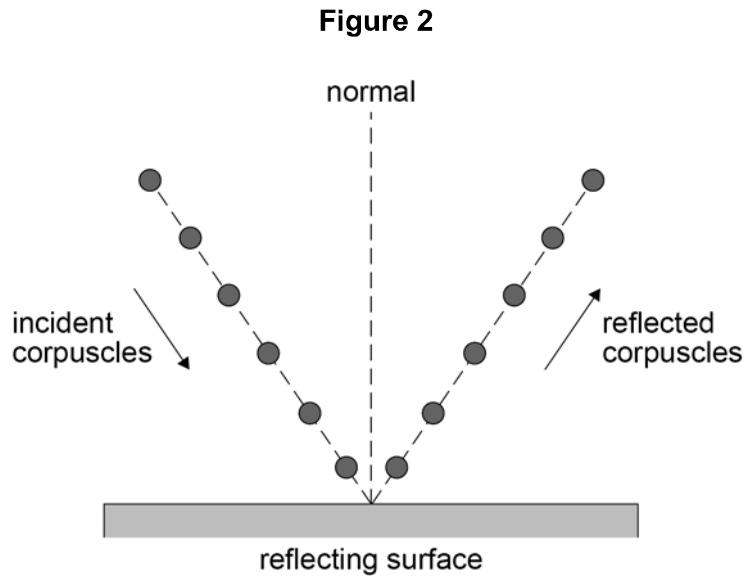
8



0 2

Newton used a corpuscular theory of light to explain reflection.

**Figure 2** shows how corpuscles would reflect from a horizontal surface.



0 2 . 1

What happens to the horizontal and vertical components of the velocity of the corpuscles, according to the theory, when they are reflected?

Tick (✓) **one** box.

[1 mark]

Horizontal component of velocity	Vertical component of velocity	Tick the correct box
Unchanged	Changed	<input type="checkbox"/>
Changed	Unchanged	<input type="checkbox"/>
Unchanged	Unchanged	<input type="checkbox"/>
Changed	Changed	<input type="checkbox"/>

Question 2 continues on the next page

Turn over ►



0 2 . 2

Newton used the corpuscular theory to explain the refraction of light at an interface between air and water.

Huygens used the wave theory to explain the refraction of light at the interface.

Discuss the evidence that led to the rejection of Newton's corpuscular theory.

In your answer you should include

- how each theory explains refraction
- how experimental evidence led to the acceptance of the wave theory.

[6 marks]

---

---

---

---

---

---

---

---

---

---

---

---

---

---

---

---

---

---

---

---

---

---

---

---

---

---

---





**0 2 . 3** Light is now known to behave as an electromagnetic wave.

Describe a plane-polarised electromagnetic wave travelling through a vacuum.  
You may wish to draw a labelled diagram.

**[3 marks]**

---

---

---

---

---

---

---

---

**10**





**Turn over for the next question**

*Do not write  
outside the  
box*

**DO NOT WRITE ON THIS PAGE  
ANSWER IN THE SPACES PROVIDED**

**Turn over ►**



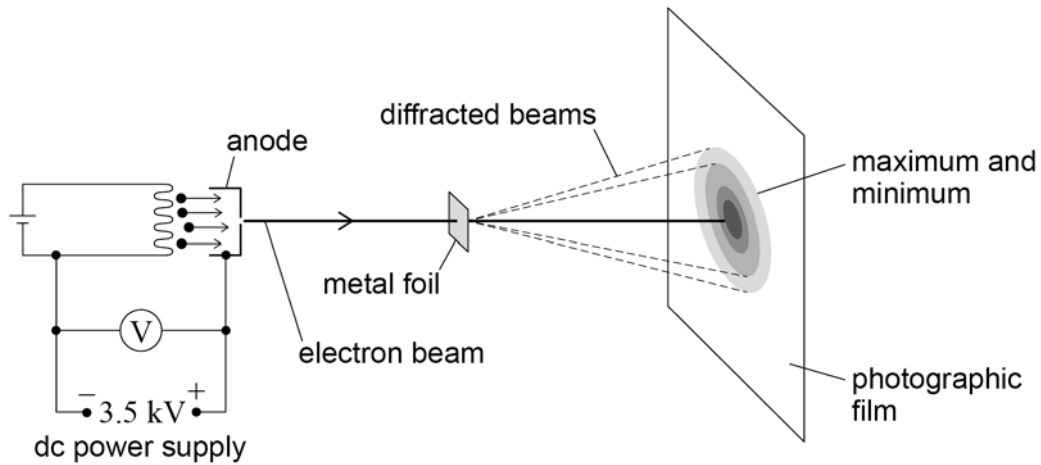
0 3

**Figure 3** shows part of the apparatus used to investigate electron diffraction.

Electrons were accelerated through a potential difference to form a beam which was then incident on a thin metal foil.

Regions of maximum and minimum intensity formed on a photographic film behind the foil.

**Figure 3**



0 3 . 1

State de Broglie's hypothesis.

[2 marks]

---



---



---



---

0 3 . 2

The voltmeter in **Figure 3** shows a reading of 3.5 kV.

Determine whether this voltmeter reading is consistent with a de Broglie wavelength for the electrons in the beam of about 0.02 nm.

[2 marks]

---



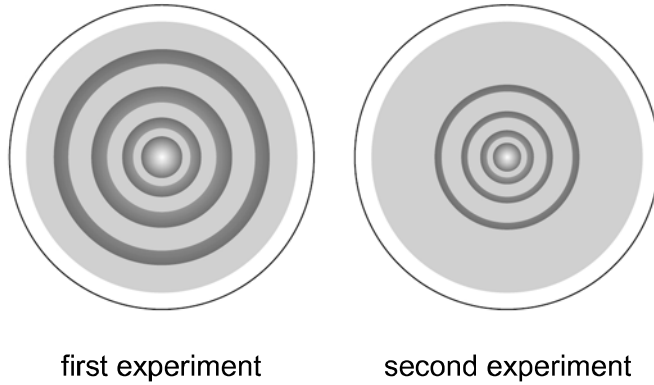
---



0 3 . 3

The experiment is repeated using a similar arrangement to that shown in **Figure 3**. **Figure 4** shows the diffraction patterns from the two experiments.

**Figure 4**



State and explain **two** independent changes that could be made to the arrangement in **Figure 3** to produce the result shown for the second experiment in **Figure 4**. **[4 marks]**

First change \_\_\_\_\_

---



---



---



---



---

Second change \_\_\_\_\_

---



---



---



---



---

8

Turn over ►



0 4

**Table 1** shows data of speed  $v$  and kinetic energy  $E_k$  for electrons from a modern version of the Bertozzi experiment.

**Table 1**

$v / 10^8 \text{ m s}^{-1}$	$E_k / \text{MeV}$
2.60	0.5
2.73	0.7
2.88	1.3
2.96	2.6
2.99	5.8

0 4 . 1

Classical mechanics predicts that  $E_k \propto v^2$ .

Deduce whether the data in **Table 1** are consistent with this prediction.

**[2 marks]**


---



---



---



---



**0 4 . 2**

Discuss how Einstein's theory of special relativity explains the data in **Table 1**.

**[4 marks]**

---

---

---

---

---

---

---

---

---

---

---

**0 4 . 3**

Calculate, in J, the kinetic energy of one electron travelling at a speed of  $0.95c$ .

**[3 marks]**

kinetic energy = \_\_\_\_\_ J

**END OF QUESTIONS**

9



**There are no questions printed on this page**

*Do not write  
outside the  
box*

**DO NOT WRITE ON THIS PAGE  
ANSWER IN THE SPACES PROVIDED**















**There are no questions printed on this page**

*Do not write  
outside the  
box*

**DO NOT WRITE ON THIS PAGE  
ANSWER IN THE SPACES PROVIDED**

**Copyright information**

For confidentiality purposes, acknowledgements of third-party copyright material are published in a separate booklet rather than including them on the examination paper or support materials. This booklet is published after each examination series and is available for free download from [www.aqa.org.uk](http://www.aqa.org.uk) after the live examination series.

Permission to reproduce all copyright material has been applied for. In some cases, efforts to contact copyright-holders may have been unsuccessful and AQA will be happy to rectify any omissions of acknowledgements. If you have any queries please contact the Copyright Team, AQA, Stag Hill House, Guildford, GU2 7XJ.

Copyright © 2019 AQA and its licensors. All rights reserved.



20



196A7408/3BD

IB/M/Jun19/7408/3BD