

Please write clearly in block capitals.

Centre number

--	--	--	--	--

Candidate number

--	--	--	--

Surname

Forename(s)

Candidate signature

I declare this is my own work.

GCSE MATHEMATICS

H

Higher Tier


Paper 1 Non-Calculator

Time allowed: 1 hour 30 minutes

Materials

For this paper you must have:

- mathematical instruments
- the Formulae Sheet (enclosed).



You must **not** use a calculator.

Instructions

- Use black ink or black ball-point pen. Draw diagrams in pencil.
- Fill in the boxes at the top of this page.
- Answer **all** questions.
- You must answer the questions in the spaces provided. Do not write outside the box around each page or on blank pages.
- If you need extra space for your answer(s), use the lined pages at the end of this book. Write the question number against your answer(s).
- Do **all** rough work in this book. Cross through any work you do not want to be marked.

Information

- The marks for questions are shown in brackets.
- The maximum mark for this paper is 80.
- You may ask for more answer paper, graph paper and tracing paper. These must be tagged securely to this answer book.

For Examiner's Use	
Pages	Mark
2–3	
4–5	
6–7	
8–9	
10–11	
12–13	
14–15	
16–17	
18–19	
20–21	
22–23	
24–25	
26	
TOTAL	

Advice

In all calculations, show clearly how you work out your answer.



Answer **all** questions in the spaces provided.

- 1 Which of these is the equation of a straight line?
Circle your answer.

[1 mark]

$$y = 6x^2$$

$$y = x - 6$$

$$y = x^2 + 6$$

$$y = \frac{6}{x}$$

- 2 What is 0.28 as a fraction of 0.8 ?
Circle your answer.

[1 mark]

$$\frac{7}{20}$$

$$\frac{2}{7}$$

$$\frac{20}{7}$$

$$\frac{7}{2}$$

- 3 Circle the calculation that increases 240 by 7.5%

[1 mark]

$$240 \times 1.0705$$

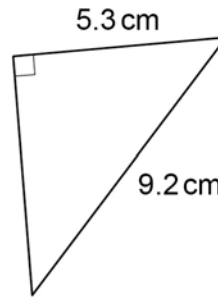
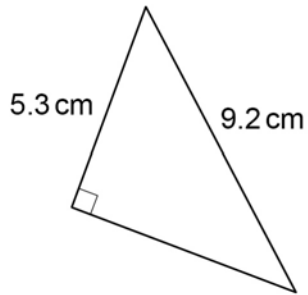
$$240 \times 1.705$$

$$240 \times 1.075$$

$$240 \times 1.75$$



4

Not drawn
accurately

Circle the reason why the triangles are congruent.

[1 mark]

ASA

RHS

SAS

SSS

5

Work out $80\,000\,000 \div 200$

Give your answer in standard form.

[2 marks]

Answer _____



6 (a) Work out $\frac{3^{12}}{3^7}$

Give your answer as a whole number.

[2 marks]

Answer _____

6 (b) Simplify $8 \times 2^6 \times 2^4$

Give your answer as a power of 2

[2 marks]

Answer _____



7

In a group of 98 students

25 study both Art and French

10 study Art but do not study French

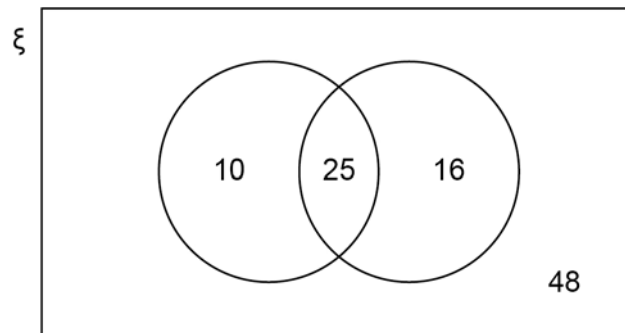
41 study French.

Joel draws this Venn diagram to represent the information.

ξ = the group of 98 students

A = the students who study Art

F = the students who study French



Make **two** criticisms of his diagram.

[2 marks]

Criticism 1 _____

Criticism 2 _____

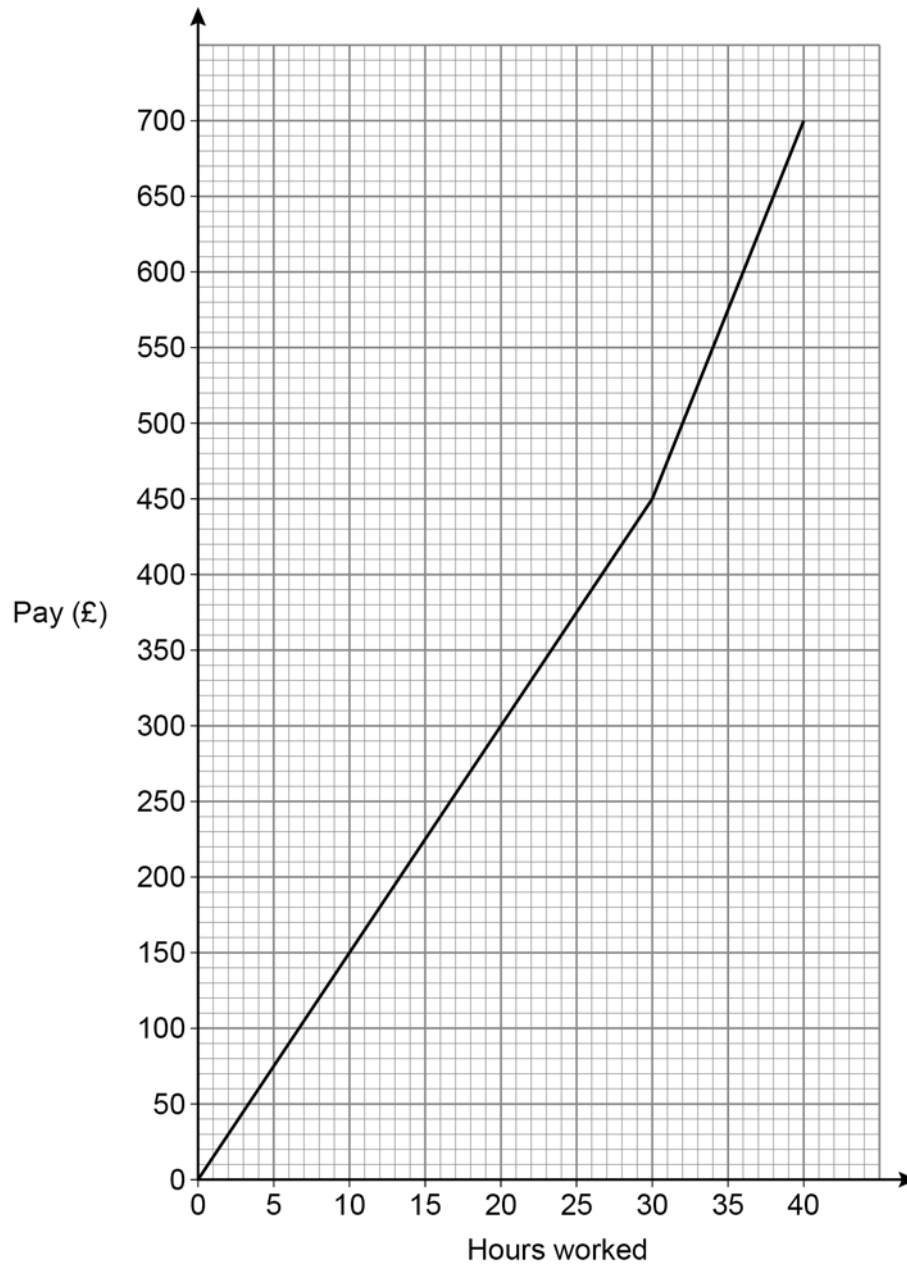
Turn over for the next question

Turn over ►



- 8 In a week, Samir is paid
a basic hourly rate for the first 30 hours worked
an overtime hourly rate for any extra hours worked.

The graph shows his pay for working up to 40 hours in a week.



Work out the ratio basic hourly rate : overtime hourly rate

Give your answer in its simplest form.

[3 marks]

Answer _____ : _____

9 (a) In each box, write a fraction **less** than 1 to make a correct calculation.

[1 mark]

$$\boxed{\frac{\quad}{\quad}} \times \boxed{\frac{\quad}{\quad}} = \frac{3}{10}$$

9 (b) In each box, write a decimal **less** than 1 to make a correct calculation.

[1 mark]

$$\boxed{\quad} \times \boxed{\quad} = 0.06$$

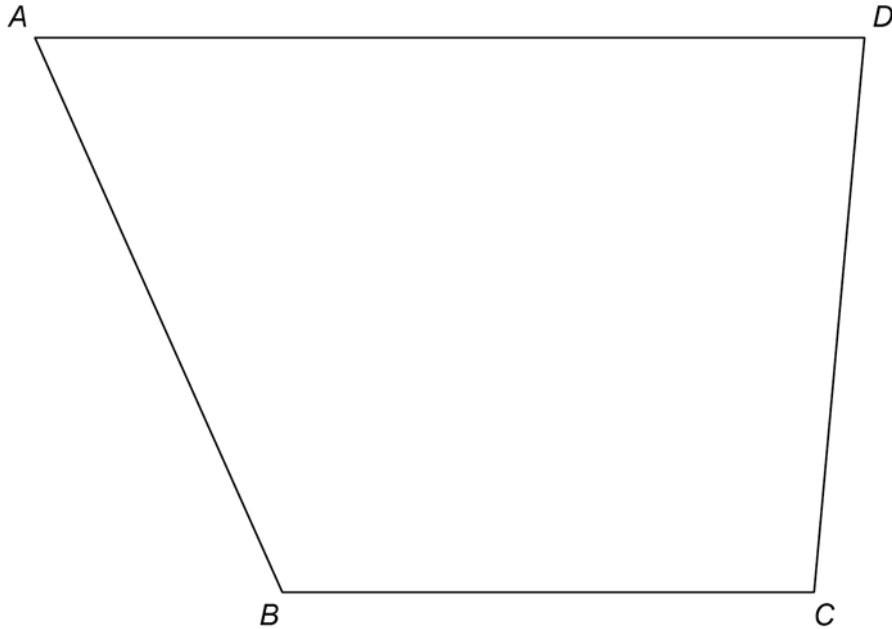
<hr/> 5

Turn over ►



10 Use a ruler and compasses in this question.

$ABCD$ represents a garden.



A tree is to be planted in the garden.

The tree will be in the region that is closer to AB than to BC .

Label the region, R , where the tree could be planted.

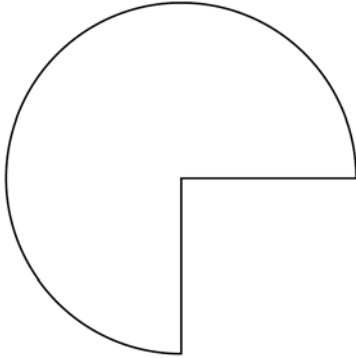
Show all your construction lines.

[3 marks]

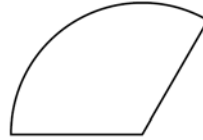


11 Here are two shapes, P and Q.

P
 $\frac{3}{4}$ of a circle, radius 20 cm



Q
 $\frac{1}{3}$ of a circle, radius 15 cm



Not drawn
accurately

How many times bigger is the area of P than the area of Q?
You **must** show your working.

[4 marks]

Answer _____

7

Turn over ►



- 12 (b)** To win a prize, a player must pick two cards marked Yes.
450 people each play the game once.

How many people are expected to win a prize?

[3 marks]

Answer _____

- 13** Solve $\frac{2w}{15} = \frac{4}{5}$

[2 marks]

$w =$ _____

7

Turn over ►



- 14** 15 workers can complete a job in 8 days.
How many **more** workers are needed to complete the job in 6 days?
Assume that **all** of the workers work at the same rate.

[3 marks]

Answer _____

- 15** The cross section of a prism has n sides.
Circle the expression for the number of faces of the prism.

[1 mark]

n

$2n$

$3n$

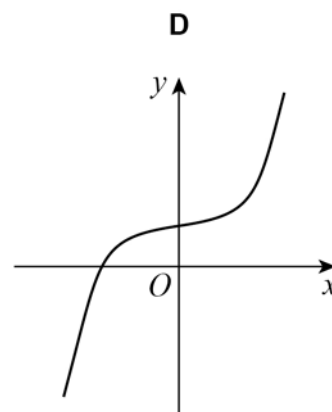
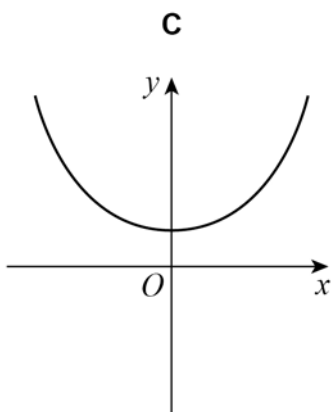
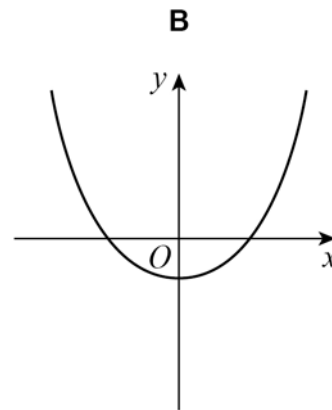
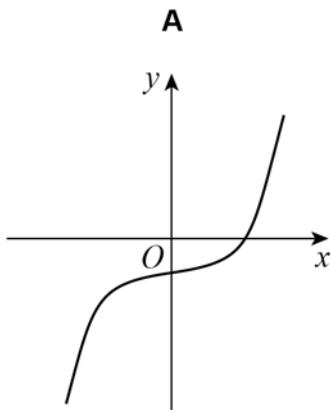
$n + 2$



16

Circle the letter of the possible sketch graph of $y = x^3 - 4$

[1 mark]

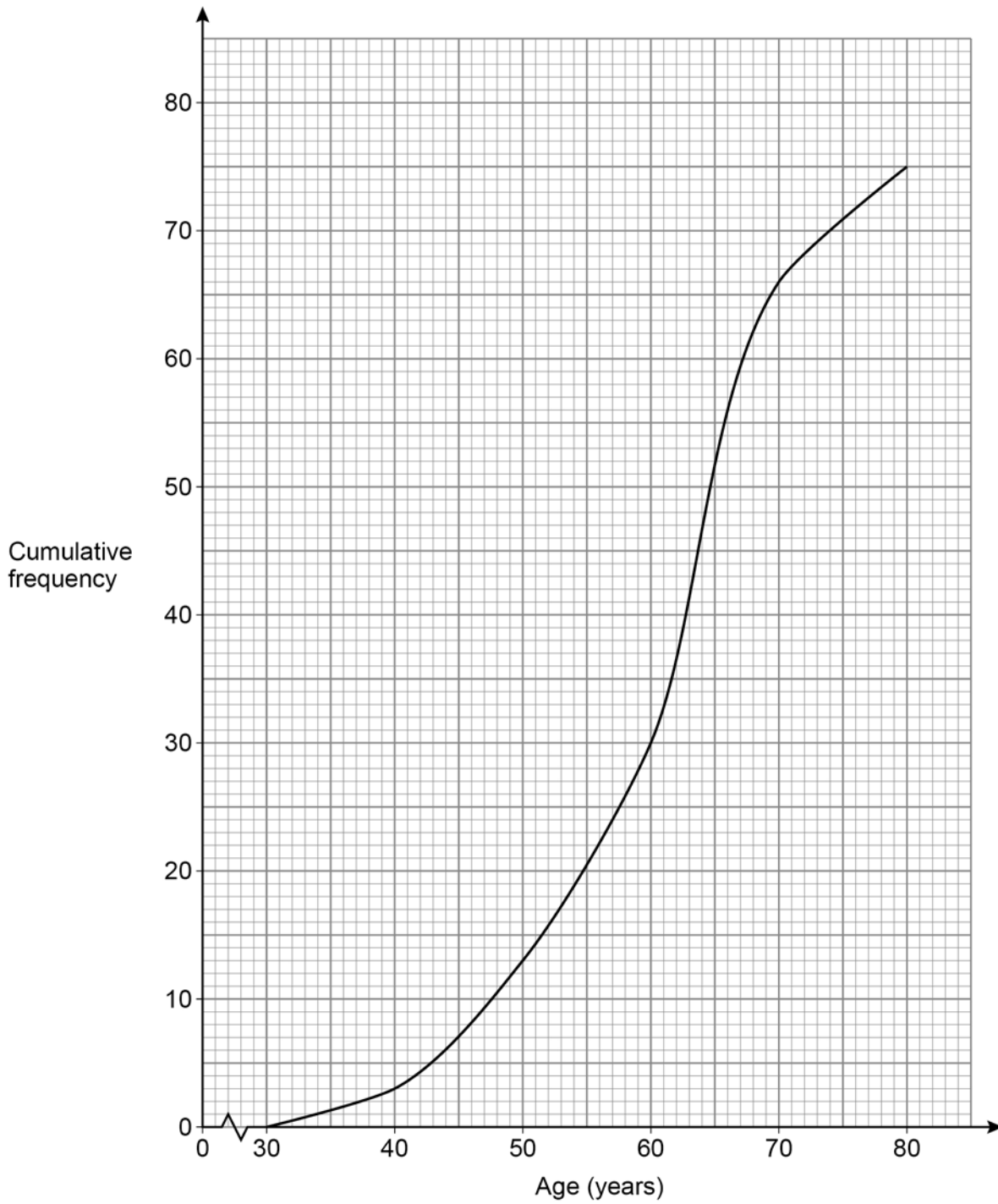


Turn over for the next question

Turn over ►



- 17 75 people attend a clinic.
Their ages are recorded and a cumulative frequency diagram is drawn.



A nurse makes a statement about the **ages** of the people at the clinic.

He says,

“More than twice as many people are in their 60s as in their 50s.”

Is he correct?

Tick a box.

Yes

No

Show working to support your answer.

[3 marks]

Turn over for the next question



- 19** The first three terms of a sequence are x y xy
The sequence is continued by multiplying the previous two terms.

- 19 (a)** Circle the 5th term of the sequence.

[1 mark]

x^3y^3

x^5y^5

x^3y^4

x^2y^3

- 19 (b)** The 8th term of the sequence is x^8y^{13}
The value of this term is negative.

What does this mean about the values of x and y ?

Tick **one** box for each row.

[2 marks]

	Must be positive	Must be negative	Could be either
x			
y			

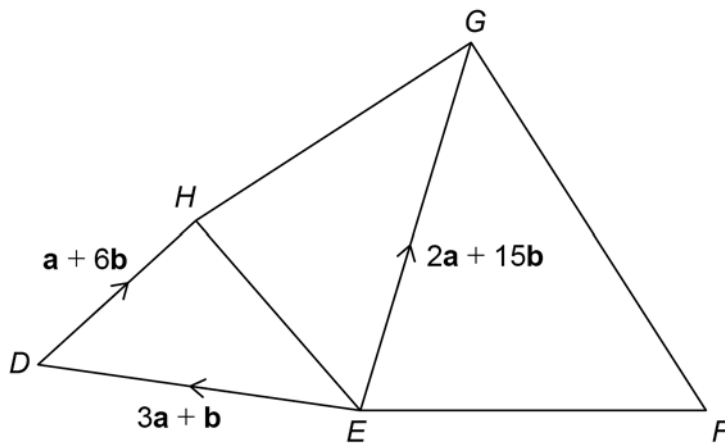
Turn over for the next question

Turn over ►



21

Five points are connected by vectors.

Not drawn
accurately

$$\vec{FG} = 2\vec{EH}$$

Work out \vec{FE} in terms of \mathbf{a} and \mathbf{b} .

[4 marks]

Answer _____

Turn over ►

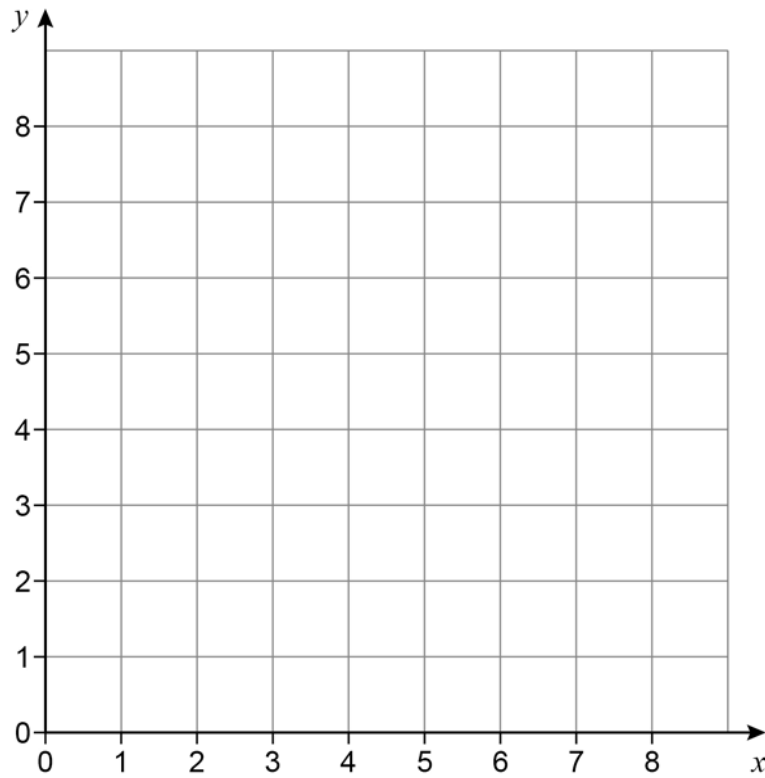


23 On the grid, identify the region represented by

$$x > 3 \quad \text{and} \quad y > 1 \quad \text{and} \quad x + y \leq 7$$

Label the region R.

[3 marks]



Turn over for the next question

Turn over ►

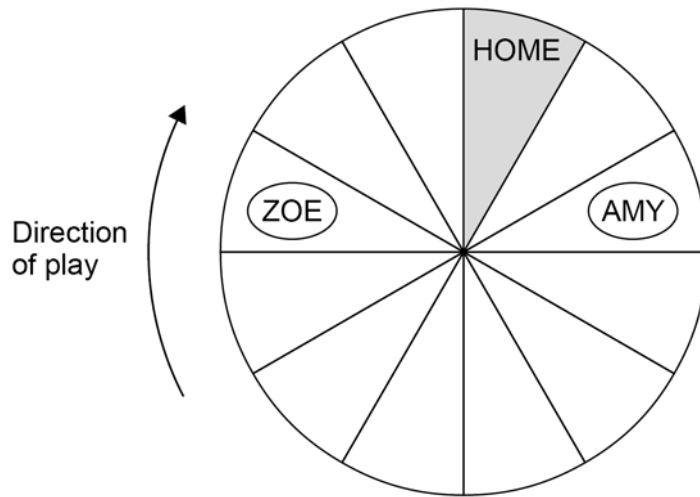


26

Zoe and Amy are playing a board game.

- They each have one disc and take turns to roll a fair, ordinary dice.
- The player moves their disc **clockwise** the number of spaces shown on the dice.
- The winner is the first player whose disc is on HOME at the end of a turn.

Here is the board after Amy's turn.



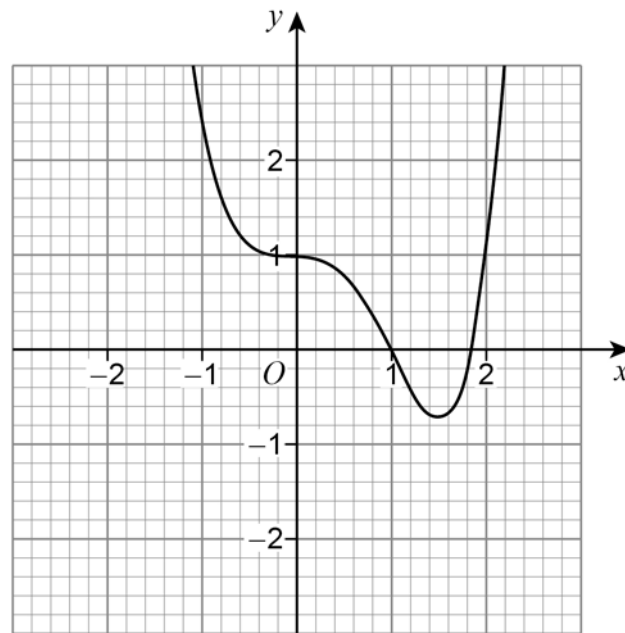
Work out the probability that Zoe wins within her next two turns.

[4 marks]

Answer _____



- 27 The grid shows the graph of $y = f(x)$



On the grid, draw the graph of $y = -f(x)$

[2 marks]

Turn over for the next question

Turn over ►



28 Work out the value of $(\cos 30^\circ \times \sin 45^\circ \times \tan 60^\circ)^2$ **[4 marks]**

Answer _____

END OF QUESTIONS

— 4



There are no questions printed on this page

*Do not write
outside the
box*

**DO NOT WRITE ON THIS PAGE
ANSWER IN THE SPACES PROVIDED**



There are no questions printed on this page

*Do not write
outside the
box*

**DO NOT WRITE ON THIS PAGE
ANSWER IN THE SPACES PROVIDED**

Copyright information

For confidentiality purposes, all acknowledgements of third-party copyright material are published in a separate booklet. This booklet is published after each live examination series and is available for free download from www.aqa.org.uk.

Permission to reproduce all copyright material has been applied for. In some cases, efforts to contact copyright-holders may have been unsuccessful and AQA will be happy to rectify any omissions of acknowledgements. If you have any queries please contact the Copyright Team.

Copyright © 2022 AQA and its licensors. All rights reserved.



3 2



2 2 6 G 8 3 0 0 / 1 H

IB/M/Jun22/8300/1H