

Please write clearly in block capitals.

Centre number

--	--	--	--	--	--

Candidate number

--	--	--	--	--	--

Surname

Forename(s)

Candidate signature

I declare this is my own work.

GCSE MATHEMATICS

F


Foundation Tier Paper 2 Calculator

Time allowed: 1 hour 30 minutes

Materials

For this paper you must have:

- a calculator
- mathematical instruments
- the Formulae Sheet (enclosed).



Instructions

- Use black ink or black ball-point pen. Draw diagrams in pencil.
- Fill in the boxes at the top of this page.
- Answer **all** questions.
- You must answer the questions in the spaces provided. Do not write outside the box around each page or on blank pages.
- If you need extra space for your answer(s), use the lined pages at the end of this book. Write the question number against your answer(s).
- Do **all** rough work in this book. Cross through any work you do not want to be marked.

Information

- The marks for questions are shown in brackets.
- The maximum mark for this paper is 80.
- You may ask for more answer paper, graph paper and tracing paper. These must be tagged securely to this answer book.

For Examiner's Use	
Pages	Mark
2–3	
4–5	
6–7	
8–9	
10–11	
12–13	
14–15	
16–17	
18–19	
20–21	
22–23	
24–25	
26–27	
TOTAL	

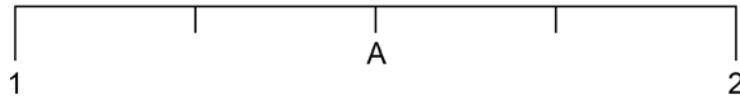
Advice

In all calculations, show clearly how you work out your answer.



Answer **all** questions in the spaces provided.

- 1 Here is a number line.



Which number is at A?

Circle your answer.

[1 mark]

1.2

1.4

1.5

1.8

- 2 Here is an expression $5a + 7b + 9c$

Which is the second term?

Circle your answer.

[1 mark]

a

7

$7b$

9

- 3 How many hours are there in 5 days?

Circle your answer.

[1 mark]

35

120

150

300



- 4 Which of these parts of a circle is a curve?
Circle your answer.

[1 mark]

circumference

diameter

centre

radius

- 5 (a) Write $1\frac{4}{9}$ as an improper fraction.

[1 mark]

Answer _____

- 5 (b) Convert $\frac{7}{16}$ to a decimal.

[1 mark]

Answer _____

- 5 (c) Round 2.84 to 1 decimal place.

[1 mark]

Answer _____

7

Turn over ►



6 A machine to clean carpets can be hired.

Machine hire

£25 per day

Cleaning fluid

1-litre bottle £10

2-litre bottle £18

Rana wants to

hire the machine for 1 day

and

buy 5 litres of cleaning fluid.

Work out the **smallest** total amount she could pay.

[3 marks]

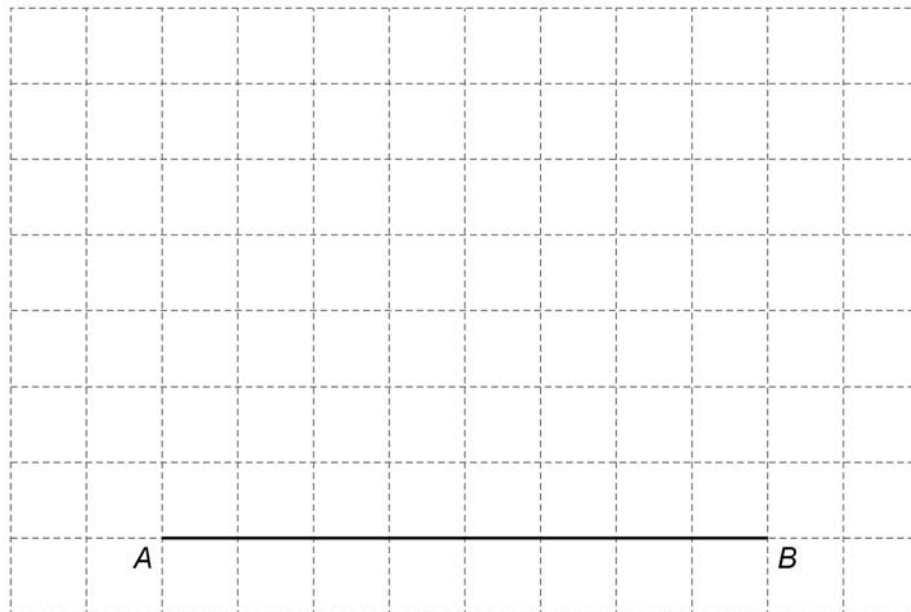
Answer £ _____



7

Quadrilateral $ABCD$ has

- angle $ABC = 90^\circ$
- $BC = 4$ cm
- CD is parallel to BA
- $CD = 6$ cm

Draw $ABCD$ on the centimetre grid. AB has been drawn for you.**[3 marks]**

Turn over for the next question

Turn over ►



- 8 The masses of some puppies were recorded.
The smallest mass was 7 kilograms 200 grams.
The range of the masses was 650 grams.

What was the **largest** mass?

Give your answer in kilograms and grams.

[2 marks]

Answer _____ kilograms _____ grams

- 9 (a) Ali revises each day for five days.
On each of the first **four** days he revises from 5 pm to 8 pm
On the fifth day he starts revising at 1 pm
He finishes when he has revised for a **total** of 18 hours for the five days.
What time does he finish on the fifth day?

[3 marks]

Answer _____



9 (b) Sofia is revising for Maths.

She tries to work out $3 \times (4 + 2)$

Here is her working.

$$\begin{aligned} 3 \times (4 + 2) &= 12 + 3 \\ &= 15 \end{aligned}$$

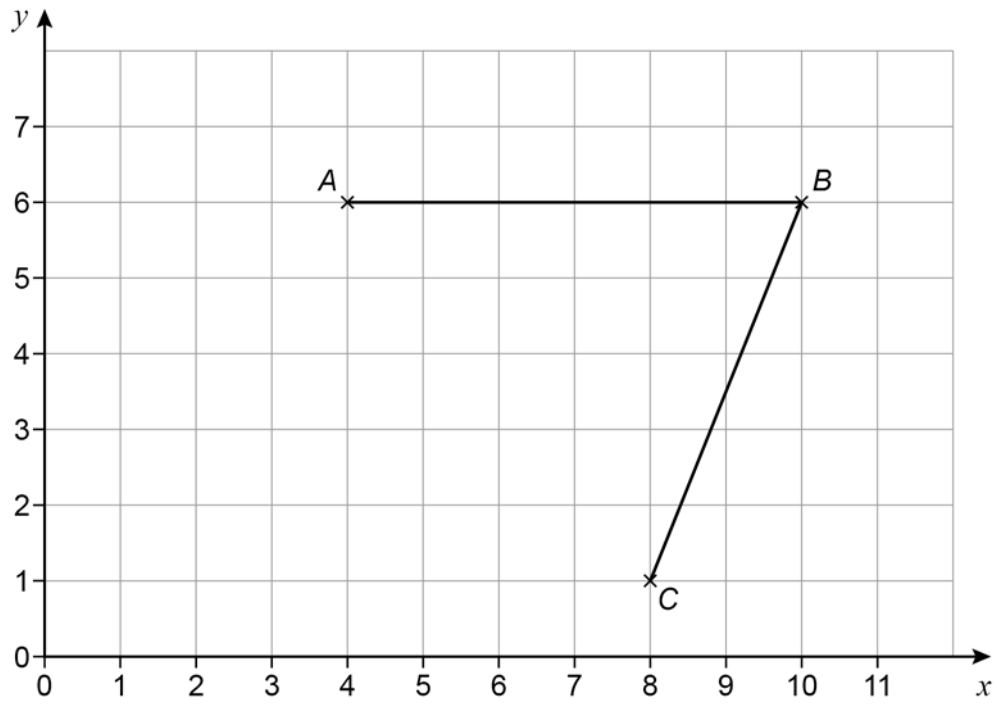
What mistake has she made?

[1 mark]

Turn over for the next question



- 10 Lines AB and BC are shown.



- 10 (a) Write down the coordinates of C .

[1 mark]

Answer (_____ , _____)

- 10 (b) Write down the coordinates of the midpoint of AB .

[1 mark]

Answer (_____ , _____)



10 (c) D is the point on the grid that makes $ABCD$ a parallelogram.

Work out the coordinates of D .

[1 mark]

Answer (_____ , _____)

10 (d) Write down the equation of the line passing through A and B .

[1 mark]

Answer _____

Turn over for the next question



11 Nihal has savings of £168
He uses $\frac{5}{7}$ of his savings to buy sports equipment.

11 (a) Assume that he will use $\frac{1}{3}$ of the **rest** of the money to buy a shirt.

How much of his savings, in £, will he have left?

[3 marks]

Answer £ _____



11 (b) In fact, he uses **more** than $\frac{1}{3}$ of the rest of the money to buy a shirt.

What does this tell you about how much of his savings he has left?

Tick **one** box.

[1 mark]

It is more than the answer to part (a)

It is the same as the answer to part (a)

It is less than the answer to part (a)

It is not possible to tell

Turn over for the next question

Turn over ►



- 12** Sue is working with 2-digit numbers.
She multiplies the digits together to get an answer.

For 63, she multiplies 6 by 3
so 63 gives an answer of 18

- 12 (a)** Write down a different 2-digit number that gives an answer of 18

[1 mark]

Answer _____

- 12 (b)** Write down a 2-digit number that gives an answer of 0

[1 mark]

Answer _____

- 12 (c)** Write down a 2-digit number that gives an answer **greater** than 70

[1 mark]

Answer _____



13

Steve and Molly each buy 480 tea bags.

Small packs

80 tea bags for £1.90

Large packs

160 tea bags for £3.25

Steve buys only **small** packs.Molly buys only **large** packs.In total, how much **more** than Molly does Steve pay?**[4 marks]**

Answer £ _____




14

Match each expression on the left with one on the right.

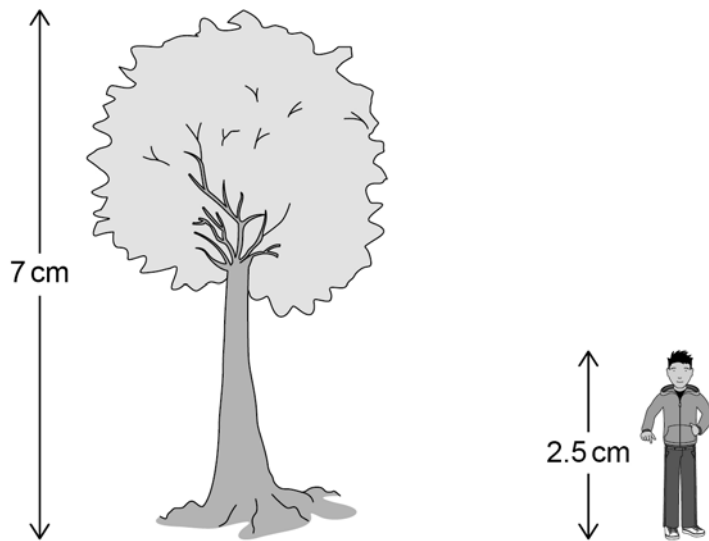
One has been done for you.

[3 marks]

$a + 3 + 2$	$a + 6$
$a + 3 \times 2$	$a + 5$
$a \times 3 \times 2$	$3a + 6$
$a \times 3 + 2$	$6a$
	$3a + 2$



- 15 The scale drawing shows a tree and a student.



The actual height of the tree is 4.2 metres.

Work out the actual height of the student.

[3 marks]

Answer _____ m

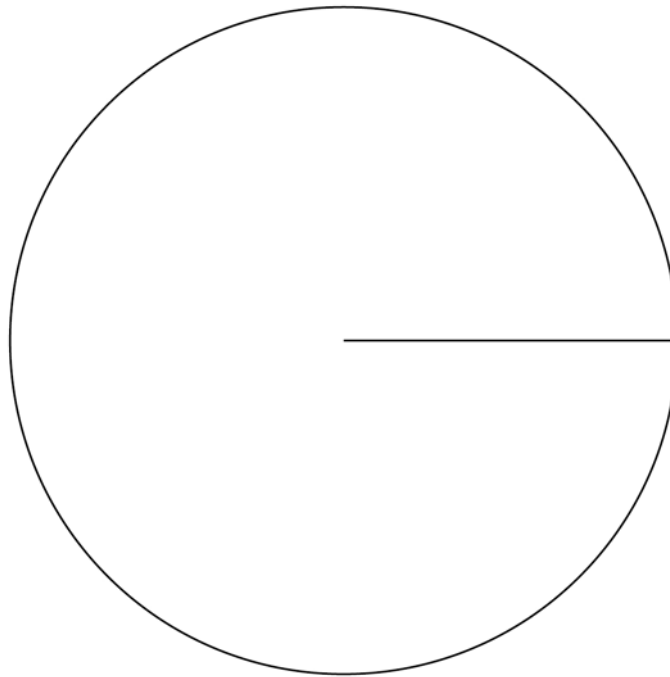


16 60 people were asked if they would vote in an election.

- $\frac{1}{4}$ of the people said No
- 20 people said Yes
- The rest said Maybe

Draw and label a pie chart to show this information.

[3 marks]





- 17 (a) x is at least 7
Circle the correct inequality.

[1 mark]

$x < 7$

$x \leq 7$

$x > 7$

$x \geq 7$

- 17 (b) Multiply out $5c(2d + 1)$

[2 marks]

Answer _____

- 17 (c) Factorise $21x + 28$

[1 mark]

Answer _____

7

Turn over ►



- 18 (a) The people at a party are either adults or children.

adults : children = 9 : 11

What percentage are adults?

[2 marks]

Answer _____ %

- 18 (b) The people at a different party are from Spain, France or Germany.

68% are from Spain

number from France = number from Germany

Work out number from Spain : number from France

Give your answer in the form $n : 1$

[3 marks]

Answer _____ : 1



19 (a) Circle the point that is on the line $4x + y = 7$

[1 mark]

(2, 1)

(2, -1)

(1, 2)

(-1, 2)

19 (b) Write down the coordinates of the y -intercept of the line $y = 3x + 8$

[1 mark]

Answer (_____ , _____)

19 (c) Work out the gradient of the line $2y = 10x$

[1 mark]

Answer _____

Turn over for the next question

Turn over ►



21

Show that 2125 can be written as
a cube number **multiplied** by a prime number between 10 and 20

[2 marks]

Turn over for the next question

5

Turn over ►

22

A school play takes place each day from Monday to Friday.

Here are the attendances on four of the days.

Monday	Tuesday	Wednesday	Thursday
72	83	88	97

For all **five** days, the mean attendance is 90

Work out the attendance on Friday.

[3 marks]

Answer _____



23

Sam types a constant number of words per minute.

He takes 8 minutes to type a report of 416 words.

How long does it take him to type an essay of 1534 words?

Give your answer in minutes and seconds.

[3 marks]

Answer _____ minutes _____ seconds

24

$$4y = 5x$$

Which statement is correct?

Tick **one** box.

[1 mark]

y is 80% of x

y is 125% of x

x is 20% of y

x is 400% of y

7

Turn over ►

- 25** Rosie makes phone calls to try to sell broadband.
Today, she made 120 calls.
The table shows the results.

Result of call	Frequency
Not answered	33
Answered but sale not made	81
Answered and sale made	6

- 25 (a)** Write down the relative frequency that a call was **not answered**.

[1 mark]

Answer _____

- 25 (b)** During the **rest of the week**, Rosie will make 500 calls.

Using the results in the table, how many sales does she expect to make during the **rest of the week**?

[2 marks]

Answer _____



26

Harry and Ellie each bought a printer and a hard drive.

Here is some information about how much they paid.

	Printer	Hard drive
Harry	£80	£25
Ellie	10% less than Harry	20% more than Harry

Ellie says,

“In total, I paid more than Harry because 20% is greater than 10%”

Is she correct?

Tick a box.

Yes

No

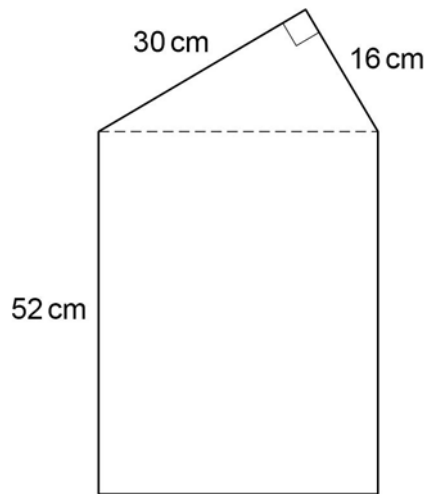
Show calculations to support your answer.

[2 marks]



27

A shape is made by joining a right-angled triangle to a rectangle.



Not drawn
accurately

Work out the area of the shape.

[5 marks]

Answer _____ cm^2



28 Solve $5(2x - 1) = 6x + 9$

[3 marks]

$x =$ _____

END OF QUESTIONS



There are no questions printed on this page

*Do not write
outside the
box*

**DO NOT WRITE ON THIS PAGE
ANSWER IN THE SPACES PROVIDED**



There are no questions printed on this page

*Do not write
outside the
box*

**DO NOT WRITE ON THIS PAGE
ANSWER IN THE SPACES PROVIDED**

Copyright information

For confidentiality purposes, all acknowledgements of third-party copyright material are published in a separate booklet. This booklet is published after each live examination series and is available for free download from www.aqa.org.uk.

Permission to reproduce all copyright material has been applied for. In some cases, efforts to contact copyright-holders may have been unsuccessful and AQA will be happy to rectify any omissions of acknowledgements. If you have any queries please contact the Copyright Team.

Copyright © 2022 AQA and its licensors. All rights reserved.



3 2



2 2 6 G 8 3 0 0 / 2 F

IB/M/Jun22/8300/2F