



A-level Chemistry (7405/2)

Paper 2: Organic and Physical Chemistry

Specimen 2015 v0.5

Session

2 hours

Materials

For this paper you must have:

- the Data Booklet, provided as an insert
- a ruler
- a calculator.

Instructions

- Answer **all** questions.
- Show **all** your working.

Information

- The maximum mark for this paper is 105.

Please write clearly, in block capitals, to allow character computer recognition.

Centre number

Candidate number

Surname

Forename(s)

Candidate signature _____

Answer **all** questions.

- 1 This question involves the use of kinetic data to deduce the order of a reaction and calculate a value for a rate constant.

The data in **Table 1** were obtained in a series of experiments on the rate of the reaction between compounds **A** and **B** at a constant temperature.

Table 1

| Experiment | Initial concentration of A / mol dm ⁻³ | Initial concentration of B / mol dm ⁻³ | Initial rate / mol dm ⁻³ s ⁻¹ |
|------------|---------------------------------------------------|---------------------------------------------------|-----------------------------------------------------|
| 1 | 0.12 | 0.26 | 2.10×10^{-4} |
| 2 | 0.36 | 0.26 | 1.89×10^{-3} |
| 3 | 0.72 | 0.13 | 3.78×10^{-3} |

- 0 1 . 1 Show how these data can be used to deduce the rate expression for the reaction between **A** and **B**.

[3 marks]

The data in **Table 2** were obtained in two experiments on the rate of the reaction between compounds **C** and **D** at a constant temperature.

Table 2

| Experiment | Initial concentration of C / mol dm ⁻³ | Initial concentration of D / mol dm ⁻³ | Initial rate / mol dm ⁻³ s ⁻¹ |
|------------|---------------------------------------------------|---------------------------------------------------|-----------------------------------------------------|
| 4 | 1.9×10^{-2} | 3.5×10^{-2} | 7.2×10^{-4} |
| 5 | 3.6×10^{-2} | 5.4×10^{-2} | To be calculated |

The rate equation for this reaction is

$$\text{rate} = k[\text{C}]^2[\text{D}]$$

- 0 1** . **2** Use the data from experiment **4** to calculate a value for the rate constant, k , at this temperature. Deduce the units of k .

[3 marks]

$$k = \underline{\hspace{10em}} \quad \text{Units} = \underline{\hspace{10em}}$$

- 0 1** . **3** Calculate a value for the initial rate in experiment **5**.

[1 mark]

$$\text{Initial rate} = \underline{\hspace{10em}} \text{ mol dm}^{-3} \text{ s}^{-1}$$

Question 1 continues on the next page

0 1 . **4** The rate equation for a reaction is

$$rate = k[E]$$

Explain qualitatively why doubling the temperature has a much greater effect on the rate of the reaction than doubling the concentration of **E**.

[3 marks]

0 1 . **5** A slow reaction has a rate constant $k = 6.51 \times 10^{-3} \text{ mol}^{-1} \text{ dm}^3$ at 300 K.

Use the equation $\ln k = \ln A - E_a/RT$ to calculate a value, in kJ mol^{-1} , for the activation energy of this reaction.

The constant $A = 2.57 \times 10^{10} \text{ mol}^{-1} \text{ dm}^3$.
The gas constant $R = 8.31 \text{ J K}^{-1} \text{ mol}^{-1}$.


[2 marks]

Activation energy = _____

Turn over for the next question

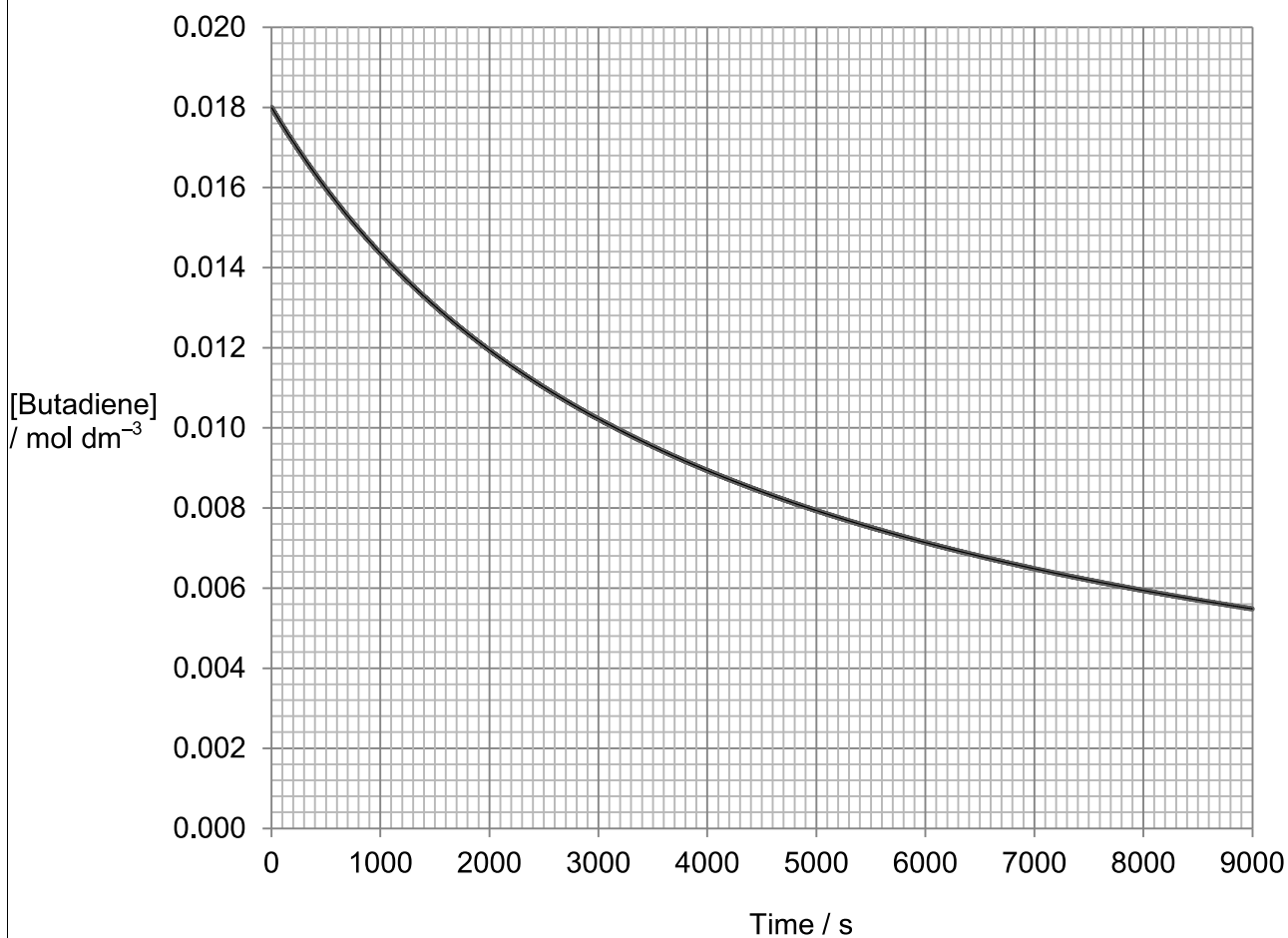
**DO NOT WRITE ON THIS PAGE
ANSWER IN THE SPACES PROVIDED**

2 Butadiene dimerises according to the equation



The kinetics of the dimerisation are studied and the graph of the concentration of a sample of butadiene is plotted against time. The graph is shown in **Figure 1**.

Figure 1



0 2 . 1 Draw a tangent to the curve when the concentration of butadiene is 0.0120 mol dm⁻³.

[1 mark]

0 2 . 2 The initial rate of reaction in this experiment has the value $4.57 \times 10^{-6} \text{ mol dm}^{-3} \text{ s}^{-1}$.

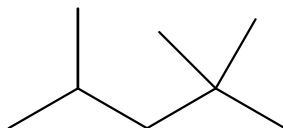
Use this value, together with a rate obtained from your tangent, to justify that the order of the reaction is 2 with respect to butadiene.

[5 marks]

Turn over for the next question

- 3 Isooctane (C_8H_{18}) is the common name for the branched-chain hydrocarbon that burns smoothly in car engines. The skeletal formula of isooctane is shown in **Figure 2**.

Figure 2



- 0 3** . **1** Give the IUPAC name for isooctane.

[1 mark]

- 0 3** . **2** Deduce the number of peaks in the ^{13}C NMR spectrum of isooctane.

[1 mark]

Only **one** answer is allowed.

Completely fill in the circle alongside the appropriate answer.

CORRECT METHOD



WRONG METHODS



If you want to change your answer you must cross out your original answer as shown.



If you wish to return to an answer previously crossed out, ring the answer you now wish to select as shown.



5



6



7



8



- 0 3** . **3** Isooctane can be formed, together with propene and ethene, in a reaction in which one molecule of an alkane that contains 20 carbon atoms is cracked.

Using molecular formulas, write an equation for this reaction.

[1 mark]

- 0 3** . **4** How do the products of the reaction in Question 3.3 show that the reaction is an example of thermal cracking?

[1 mark]

- 0 3** . **5** Deduce the number of monochloro isomers formed by isooctane. Draw the structure of the monochloro isomer that exists as a pair of optical isomers.

[2 marks]

Number of monochloro isomers _____

Structure

- 0 3** . **6** An isomer of isooctane reacts with chlorine to form only one monochloro compound.

Draw the **skeletal formula** of this monochloro compound.

[1 mark]

Question 3 continues on the next page

- 0 3 . 7** A sample of a monochlorooctane is obtained from a comet. The chlorine in the monochlorooctane contains the isotopes ^{35}Cl and ^{37}Cl in the ratio 1.5 : 1.0. Calculate the M_r of this monochlorooctane.

[2 marks]

$M_r =$ _____

- 0 3 . 8** Isooctane reacts with an excess of chlorine to form a mixture of chlorinated compounds. One of these compounds contains 24.6% carbon and 2.56% hydrogen by mass. Calculate the molecular formula of this compound.

[3 marks]

Molecular formula = _____

Turn over for the next question

**DO NOT WRITE ON THIS PAGE
ANSWER IN THE SPACES PROVIDED**

4 Alcohol **A** $(\text{CH}_3)_2\text{CHCH}(\text{OH})\text{CH}_3$ undergoes reactions separately with acidified potassium dichromate(VI) and with concentrated sulfuric acid.

0 4 . 1 Deduce the IUPAC name for alcohol **A**.

[1 mark]

0 4 . 2 Draw the structure of the organic product, **B**, formed when **A** is oxidised in the reaction with acidified potassium dichromate(VI).

[1 mark]

0 4 . 3 Two isomeric alkenes, **C** and **D**, are formed when **A** is dehydrated in the reaction with concentrated sulfuric acid.

Name the mechanism for this dehydration reaction.

[1 mark]

0 4 . 4 Draw the structure of each isomer.

[2 marks]

Isomer **C**

Isomer **D**

0 4 . 5 Name the type of structural isomerism shown by **C** and **D**. [1 mark]

0 4 . 6 List alcohol **A**, product **B** and isomer **C** in order of increasing boiling point. [1 mark]

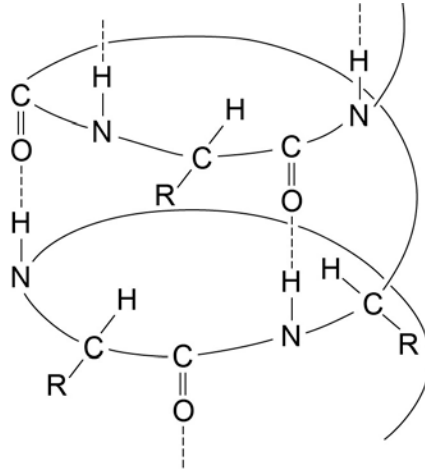
0 4 . 7 Draw the structure of the isomer of **A** that is **not** oxidised by acidified potassium dichromate(VI). [1 mark]

0 4 . 8 Draw the structure of the isomer of **A** that **cannot** be dehydrated to form an alkene by reaction with concentrated sulfuric acid. [1 mark]

Turn over for the next question

- 5 **Figure 3** shows a simplified representation of the arrangement of some amino acids in a portion of a protein structure in the form of an α -helix.

Figure 3



- 0 5** . **1** Name the type of protein structure in **Figure 3**.

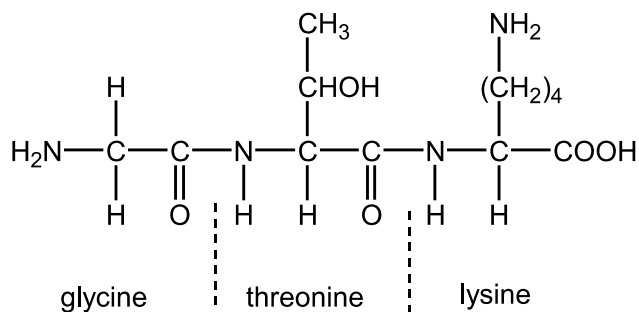
[1 mark]

- 0 5** . **2** Explain the origin of the interaction represented by the dotted lines in **Figure 3**.

[4 marks]

- 6 The tripeptide shown in **Figure 4** is formed from the amino acids glycine, threonine and lysine.

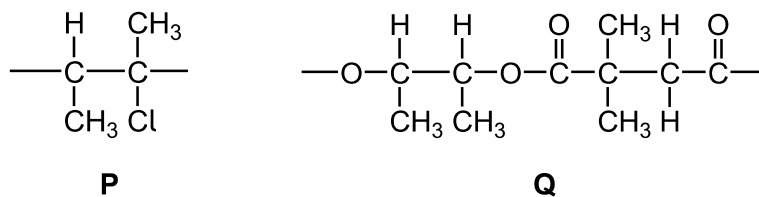
Figure 4



- 0 6** . **1** Draw a separate circle around **each** of the asymmetric carbon atoms in the tripeptide in **Figure 4**. [1 mark]
- 0 6** . **2** Draw the zwitterion of glycine. [1 mark]
- 0 6** . **3** Draw the structure of the species formed when glycine reacts with an excess of bromomethane. [1 mark]
- 0 6** . **4** Deduce the IUPAC name of threonine. [1 mark]
- _____
- 0 6** . **5** Draw the structure of the species formed by lysine at low pH. [1 mark]

7 Repeating units of two polymers, **P** and **Q**, are shown in **Figure 5**.

Figure 5



0 7 . **1** Draw the structure of the monomer used to form polymer **P**.
Name the type of polymerisation involved.

[2 marks]

Monomer

Type of polymerisation _____

0 7 . **2** Draw the structures of **two** compounds that react together to form polymer **Q**.

[2 marks]

Structure of compound 1

Structure of compound 2

0 7 . **3** Suggest an environmental advantage of polymer **Q** over polymer **P**.
Justify your answer.

[3 marks]

Advantage _____

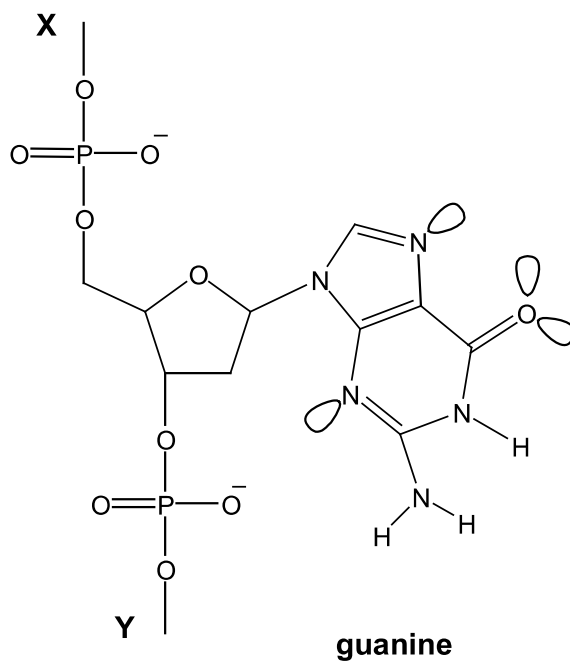
Justification _____

Turn over for the next question

8 The anticancer drug cisplatin operates by reacting with the guanine in DNA.

Figure 6 shows a small part of a single strand of DNA. Some lone pairs are shown.

Figure 6



0 8 . **1** The DNA chain continues with bonds at **X** and **Y**.

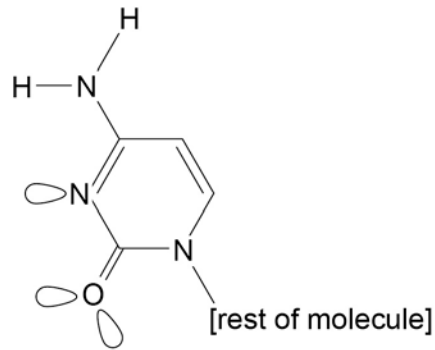
State the name of the sugar molecule that is attached to the bond at **X**.

[1 mark]

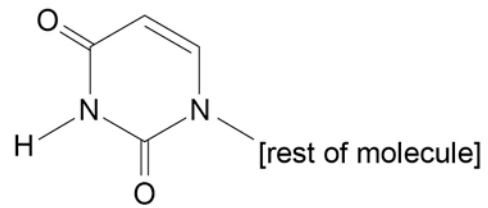
- 0 8** . **2** Messenger RNA is synthesised in cells in order to transfer information from DNA. The bases in one strand of DNA pair up with the bases used to synthesise RNA.

Figure 7 shows two bases used in RNA.

Figure 7



Base A



Base B

Suggest which of the bases **A** and **B** forms a pair with guanine in **Figure 6** when messenger RNA is synthesised.

Explain how the base that you have chosen forms a base pair with guanine.

[4 marks]

Question 8 continues on the next page

0 8 . **3** Cisplatin works because one of the atoms on guanine can form a co-ordinate bond with platinum, replacing one of the ammonia or chloride ligands. Another atom on another guanine can also form a co-ordinate bond with the same platinum by replacing another ligand.

On **Figure 6**, draw a ring round an atom in guanine that is likely to bond to platinum.

[1 mark]

0 8 . **4** An adverse effect of cisplatin is that it also prevents normal healthy cells from replicating.

Suggest **one** way in which cisplatin can be administered so that this side effect is minimised.

[1 mark]

Turn over for the next question

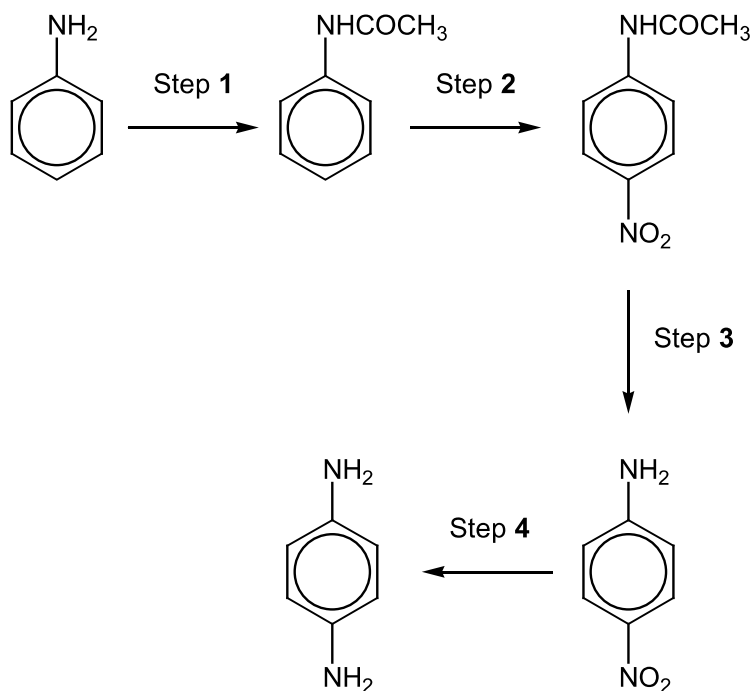
**DO NOT WRITE ON THIS PAGE
ANSWER IN THE SPACES PROVIDED**

9

1,4-diaminobenzene is an important intermediate in the production of polymers such as Kevlar and also of polyurethanes, used in making foam seating.

A possible synthesis of 1,4-diaminobenzene from phenylamine is shown in **Figure 8**.

Figure 8



0 9 . 1 A suitable reagent for step 1 is CH_3COCl

Name and draw a mechanism for the reaction in step 1.

[5 marks]

Name of mechanism _____

Mechanism

0 9 . 2 The product of step 1 was purified by recrystallisation as follows.

The crude product was dissolved in **the minimum quantity of hot water** and the hot solution was filtered through a hot filter funnel into a conical flask. This filtration removed any insoluble impurities. The flask was **left to cool to room temperature**.

The crystals formed were filtered off using a Buchner funnel and a clean cork was used **to compress the crystals in the funnel. A little cold water was then poured through the crystals.**

After a few minutes, the crystals were removed from the funnel and weighed. A small sample was then used to find the melting point.

Give reasons for each of the following practical steps.

[4 marks]

The minimum quantity of hot water was used

The flask was cooled to room temperature before the crystals were filtered off

The crystals were compressed in the funnel

A little cold water was poured through the crystals

Question 9 continues on the next page

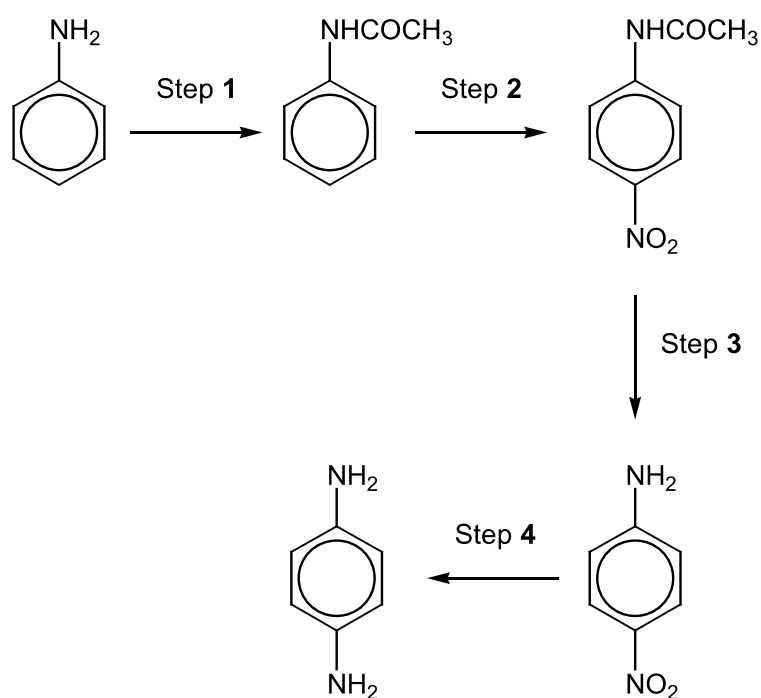
0 9 . 3 The melting point of the sample in Question 9.2 was found to be slightly lower than a data-book value.

Suggest the most likely impurity to have caused this low value and an improvement to the method so that a more accurate value for the melting point would be obtained.

[2 marks]

Figure 8 is repeated here to help you answer the following questions.

Figure 8



- 0 9 . 4** In an experiment starting with 5.05 g of phenylamine, 4.82 g of purified product were obtained in step 1.

Calculate the percentage yield in this reaction.
Give your answer to the appropriate number of significant figures.

[3 marks]

Percentage yield = _____ %

- 0 9 . 5** A reagent for step 2 is a mixture of concentrated nitric acid and concentrated sulfuric acid, which react together to form a reactive intermediate.

Write an equation for the reaction of this intermediate in step 2.

[1 mark]

- 0 9 . 6** Name a mechanism for the reaction in step 2.

[1 mark]

- 0 9 . 7** Suggest the type of reaction occurring in step 3.

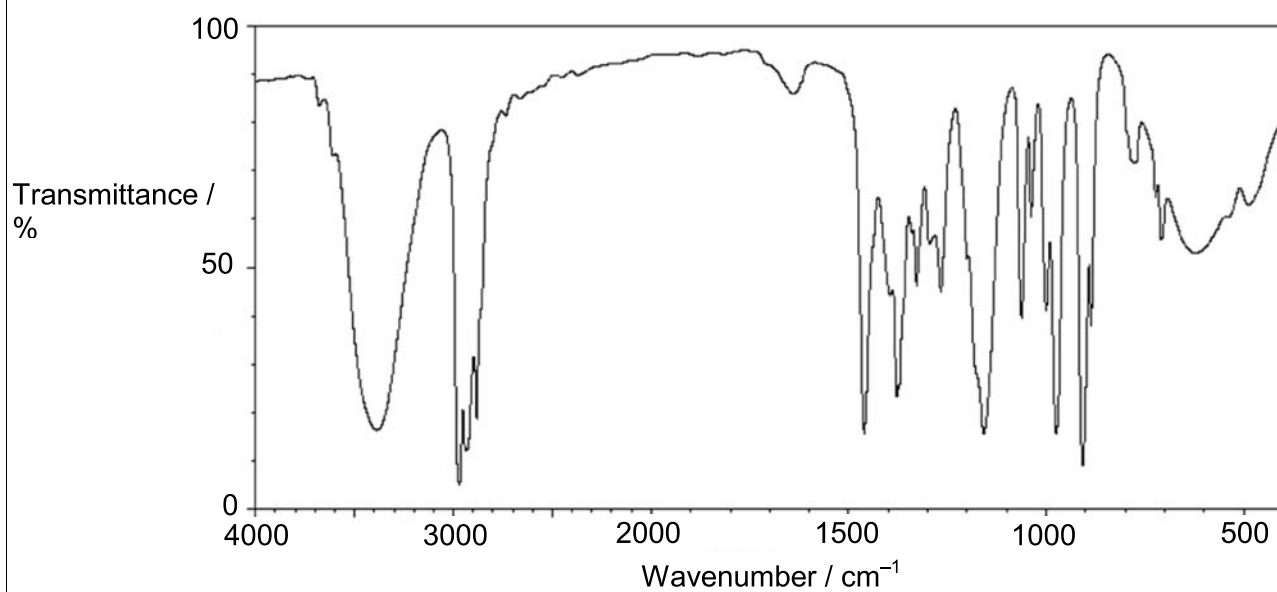
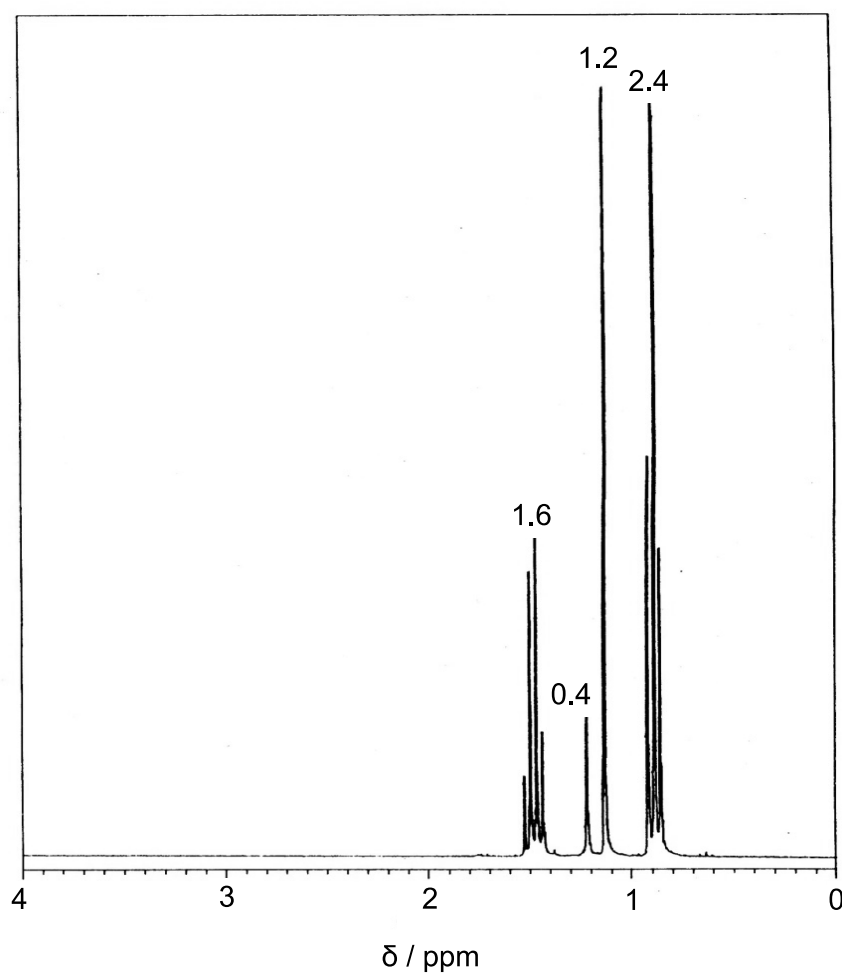
[1 mark]

- 0 9 . 8** Identify the reagents used in step 4.

[1 mark]

10

The infrared spectrum (**Figure 9**) and the ^1H NMR spectrum (**Figure 10**) of compound **R** with molecular formula $\text{C}_6\text{H}_{14}\text{O}$ are shown.

Figure 9**Figure 10**

11 Butanone is reduced in a two-step reaction using NaBH_4 followed by dilute hydrochloric acid.

| | |
|---|---|
| 1 | 1 |
|---|---|

 .

| |
|---|
| 1 |
|---|

 Write an overall equation for the reduction of butanone using $[\text{H}]$ to represent the reductant.

[1 mark]

| | |
|---|---|
| 1 | 1 |
|---|---|

 .

| |
|---|
| 2 |
|---|

 By considering the mechanism of the reaction, explain why the product has **no** effect on plane polarised light.

[6 marks]

12 But-1-ene reacts with a reagent of the form HY to form a saturated compound.

1 2 . **1** Suggest a reagent of the form HY which reacts with but-1-ene.

[1 mark]

1 2 . **2** Name and draw a mechanism for the reaction in Question **12.1**.

[5 marks]

Name of mechanism _____

Mechanism

1 2 . **3** Explain how three isomeric products are formed when HY reacts with but-1-ene.

[3 marks]

END OF QUESTIONS

There are no questions printed on this page

**DO NOT WRITE ON THIS PAGE
ANSWER IN THE SPACES PROVIDED**

There are no questions printed on this page

**DO NOT WRITE ON THIS PAGE
ANSWER IN THE SPACES PROVIDED**

There are no questions printed on this page

**DO NOT WRITE ON THIS PAGE
ANSWER IN THE SPACES PROVIDED**